

Chapter 5 Trigonometric Functions: Right Triangle Approach

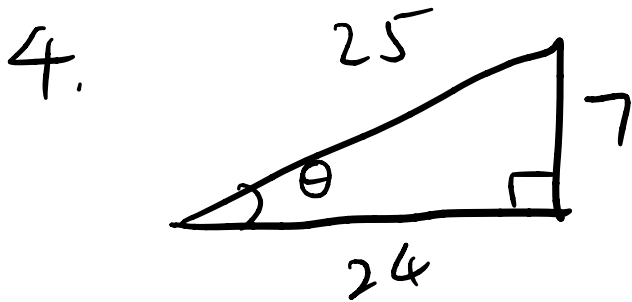
5.2 Trigonometry of Right Triangles

- ① Trigonometric Ratios
- ② Using a Calculator
- ③ Finding an Unknown Side
- ④ Evaluating an Expression
- ⑤ Solving a Right Triangle
- ⑥ Applications

① Trigonometric Ratios

3. $\sin \theta = \frac{4}{5}$, $\cos \theta = \frac{3}{5}$, $\tan \theta = \frac{4}{3}$

$\csc \theta = \frac{5}{4}$, $\sec \theta = \frac{5}{3}$, $\cot \theta = \frac{3}{4}$



$$\sin \theta = \frac{7}{25}$$

$$\csc \theta = \frac{25}{7}$$

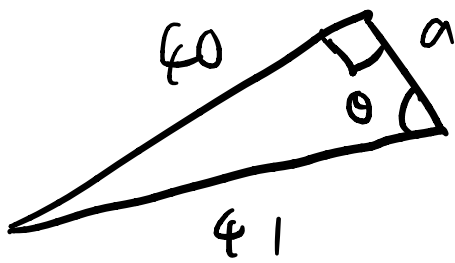
$$\cos \theta = \frac{24}{25}$$

$$\sec \theta = \frac{25}{24}$$

$$\tan \theta = \frac{7}{24}$$

$$\cot \theta = \frac{24}{7}$$

5.



$$\sin \theta = \frac{40}{41}$$

$$\csc \theta = \frac{41}{40}$$

$$40^2 + a^2 = 41^2$$

$$\sec \theta = \frac{41}{9}$$

$$a = \sqrt{41^2 - 40^2}$$

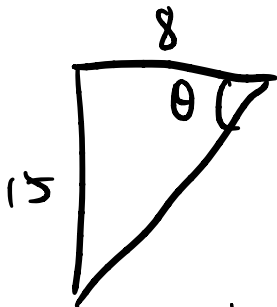
$$= 9$$

$$\cot \theta = \frac{9}{40}$$

$$\cos \theta = \frac{9}{41}$$

$$\tan \theta = \frac{40}{9}$$

6.



$$8^2 + 15^2 = h^2$$

$$h = 17$$

$$\sin \theta = \frac{15}{17}$$

$$\csc \theta = \frac{17}{15}$$

$$\cos \theta = \frac{8}{17}$$

$$\sec \theta = \frac{17}{8}$$

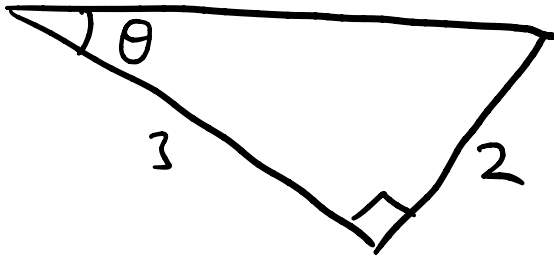
$$\tan \theta = \frac{15}{8}$$

$$\cot \theta = \frac{8}{15}$$

7.

$$h = \sqrt{3^2 + 2^2}$$

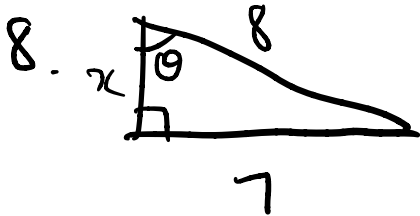
$$= \sqrt{13}$$



$$\sin \theta = \frac{2}{\sqrt{13}} \quad \csc \theta = \frac{\sqrt{13}}{2}$$

$$\cos \theta = \frac{3}{\sqrt{13}} \quad \sec \theta = \frac{\sqrt{13}}{3}$$

$$\tan \theta = \frac{2}{3} \quad \cot \theta = \frac{3}{2}$$



$$x = \sqrt{8^2 - 7^2}$$

$$= \sqrt{15}$$

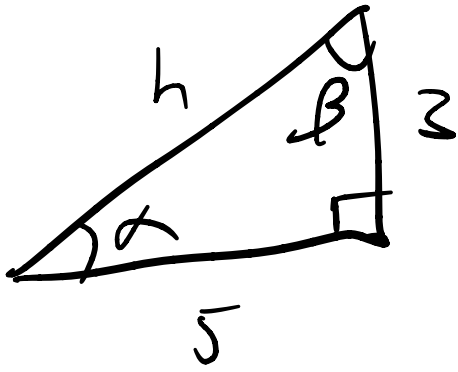
$$\sin \theta = \frac{7}{8} \quad \csc \theta = \frac{8}{7}$$

$$\cos \theta = \frac{\sqrt{15}}{8} \quad \sec \theta = \frac{8}{\sqrt{15}}$$

$$\tan \theta = \frac{7}{\sqrt{15}} \quad \cot \theta = \frac{\sqrt{15}}{7}$$

9/4/2024

9.



$$h = \sqrt{3^2 + 5^2}$$

$$= \sqrt{34}$$

$$(a) \sin \alpha = \frac{3}{\sqrt{34}}$$

$$\cos \beta = \frac{3}{\sqrt{34}}$$

$$(b) \tan \alpha = \frac{3}{5}$$

$$\cot \beta = \frac{3}{5}$$

$$(c) \sec \alpha = \frac{1}{\cos \alpha}$$

$$= \frac{\sqrt{34}}{5}$$

$$\csc \beta = \frac{\sqrt{34}}{5}$$

② Using a Calculator

11. (a) $\sin 22^\circ$, (b) $\cot 23^\circ$

$$\sin 22^\circ = 0.37461$$

$$\cot 23^\circ = 2.35585$$

12. (a) $\cos 37^\circ$
 $= 0.79863$

(b) $\csc 48^\circ$
 $= 1.34563$

13. (a) $\sec 13^\circ$
 $= 1.02630$

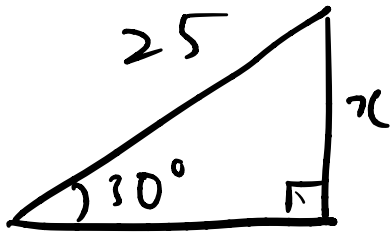
(b) $\tan 51^\circ$
 $= 1.23490$

14. (a) $\csc 10^\circ$
 $= 5.75877$

(b) $\sin 46^\circ$
 $= 0.71934$

③ Finding an Unknown Side

15.



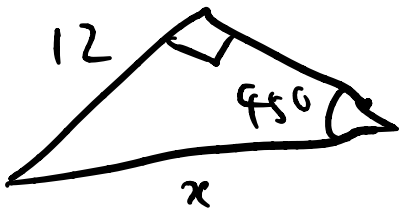
$$\sin 30^\circ = \frac{x}{25} = \frac{1}{2}$$

$$x = \frac{25}{2}$$

②

$$\begin{aligned} x &= 25 \sin 30^\circ \\ &= 25 \left(\frac{1}{2} \right) \\ &= \frac{25}{2} \end{aligned}$$

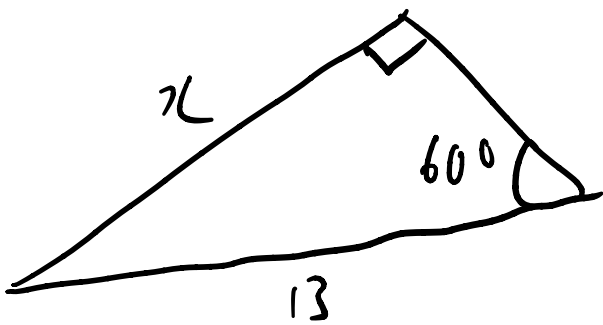
16.



$$\sin 45^\circ = \frac{12}{x} = \frac{1}{\sqrt{2}}$$

$$x = 12\sqrt{2}$$

17.

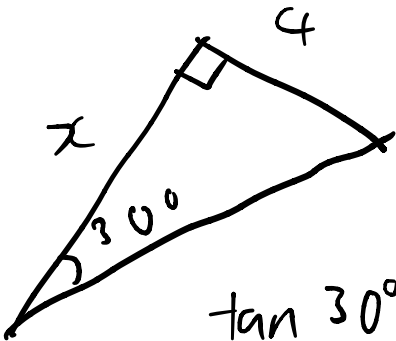


$$\sin 60^\circ = \frac{x}{13} = \frac{\sqrt{3}}{2}$$

$$x = \frac{13\sqrt{3}}{2}$$

$$= 11.25833$$

18.



$$\tan 30^\circ = \frac{1}{\sqrt{3}}$$

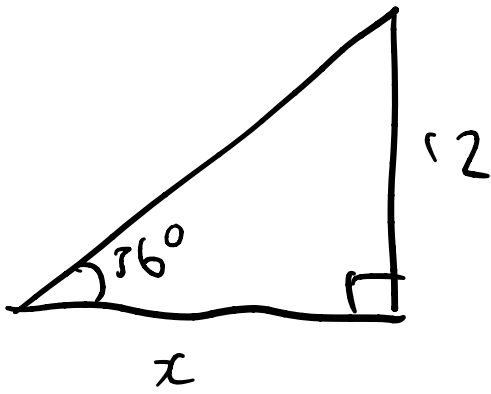
$$\tan 30^\circ = \frac{4}{x}$$

$$\frac{1}{\sqrt{3}} = \frac{4}{x}$$

$$x = 4\sqrt{3}$$

$$= 6.92820$$

19.

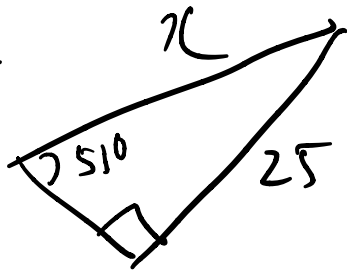


$$\tan 36^\circ = \frac{12}{x}$$

$$x = \frac{12}{\tan 36^\circ}$$

$$= 16.51658$$

20.

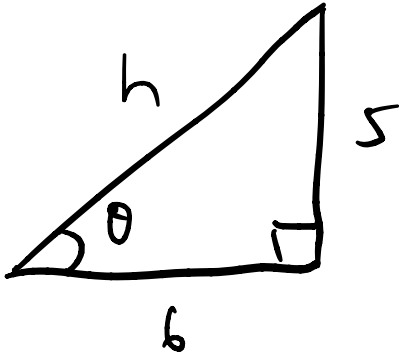


$$\sin 53^\circ = \frac{25}{x}$$

$$x = \frac{25}{\sin 53^\circ}$$

$$= 31.3$$

$$23. \tan \theta = \frac{5}{6}$$



$$5^2 + 6^2 = h^2$$

$$h = \sqrt{25 + 36}$$

$$= \sqrt{61}$$

$$\sin \theta = \frac{5\sqrt{61}}{61}$$

$$\cos \theta = \frac{6\sqrt{61}}{61}$$

$$\csc \theta = \frac{\sqrt{61}}{5}$$

$$\sec \theta = \frac{\sqrt{61}}{6}$$

$$\cot \theta = \frac{6}{5}$$

29. $\sin \frac{\pi}{6} + \cos \frac{\pi}{6}$ (4) Evaluating an Expression

$$= \frac{1}{2} + \frac{\sqrt{3}}{2}$$

$$= \frac{1 + \sqrt{3}}{2}$$

30. $\sin 30^\circ \csc 30^\circ$

$$= \frac{1}{2} (2)$$

$$= 1$$

31. $\sin 30^\circ \cos 60^\circ + \sin 60^\circ \cos 30^\circ$

$$= \left(\frac{1}{2}\right) \left(\frac{1}{2}\right) + \left(\frac{\sqrt{3}}{2}\right) \left(\frac{\sqrt{3}}{2}\right)$$

$$= \frac{1}{4} + \frac{3}{4}$$

$$= 1$$

32. $(\sin 60^\circ)^2 + (\cos 60^\circ)^2 = 1$

$$(\sin 60^\circ)^2 + (\cos 60^\circ)^2 = \left(\frac{\sqrt{3}}{2}\right)^2 + \left(\frac{1}{2}\right)^2$$

$$= \frac{3}{4} + \frac{1}{4}$$

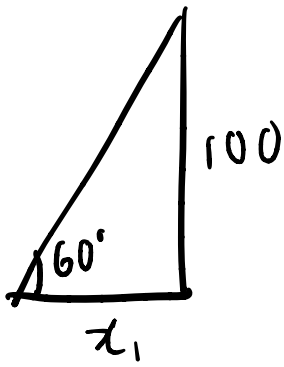
$$= 1$$

$$\begin{aligned}
33. \quad & (\cos 30^\circ)^2 - (\sin 30^\circ)^2 \\
&= \left(\frac{\sqrt{3}}{2}\right)^2 - \left(\frac{1}{2}\right)^2 \\
&= \frac{3}{4} - \frac{1}{4} \\
&= \frac{1}{2}
\end{aligned}$$

$$\begin{aligned}
34. \quad & \left(\sin \frac{\pi}{3} \cos \frac{\pi}{4} - \sin \frac{\pi}{4} \cos \frac{\pi}{3}\right)^2 \\
&= \left(\left(\frac{\sqrt{3}}{2}\right)\left(\frac{1}{\sqrt{2}}\right) - \left(\frac{1}{\sqrt{2}}\right)\left(\frac{1}{2}\right)\right)^2 \\
&= \left(\frac{\sqrt{3}}{2\sqrt{2}} - \frac{1}{2\sqrt{2}}\right)^2 \\
&= \frac{(\sqrt{3}-1)^2}{(2\sqrt{2})^2} \\
&= \frac{3 - 2\sqrt{3} + 1}{8} \\
&= \frac{4 - 2\sqrt{3}}{8} \\
&= \frac{2 - \sqrt{3}}{4}
\end{aligned}$$

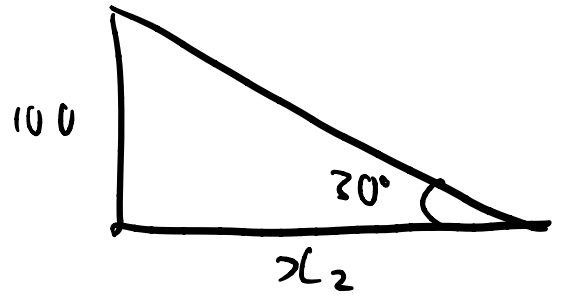
$$\begin{aligned} 35. & \left(\cos \frac{\pi}{4} + \sin \frac{\pi}{6} \right)^2 \\ &= \left(\frac{\sqrt{2}}{2} + \frac{1}{2} \right)^2 \\ &= \left(\frac{\sqrt{2} + 1}{2} \right)^2 \\ &= \frac{2 + 2\sqrt{2} + 1}{4} \\ &= \frac{3}{4} + \frac{\sqrt{2}}{2} \end{aligned}$$

47.



$$\tan \frac{\pi}{3} = \frac{\sqrt{3}}{1} = \frac{100}{x_1}$$

$$x_1 = \frac{100}{\sqrt{3}}$$



$$\tan \frac{\pi}{6} = \frac{1}{\sqrt{3}} = \frac{100}{x_2}$$

$$x_2 = 100\sqrt{3}$$

2

$$\tan \frac{\pi}{3} = \frac{100}{x_1} \quad \tan \frac{\pi}{6} = \frac{100}{x_2}$$

$$x_1 = \frac{100}{\tan \frac{\pi}{3}} \quad x_2 = \frac{100}{\tan \frac{\pi}{6}}$$

$$x = x_1 + x_2$$

$$= \frac{100}{\tan \frac{\pi}{3}} + \frac{100}{\tan \frac{\pi}{6}}$$

$$x = x_1 + x_2$$

$$= \frac{100}{\sqrt{3}} + 100\sqrt{3}$$

$$= \frac{100}{\sqrt{3}} + 100 \frac{\sqrt{3}}{\sqrt{3}} (\sqrt{3})$$

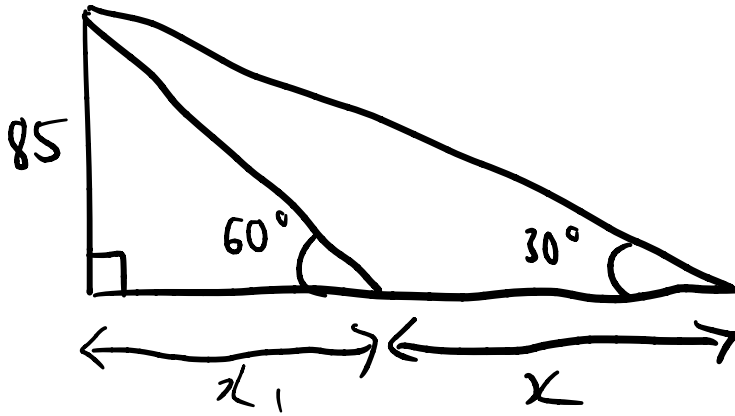
$$= \frac{100}{\sqrt{3}} + \frac{300}{\sqrt{3}}$$

$$= \frac{400}{\sqrt{3}}$$

$$= \frac{400\sqrt{3}}{3}$$

$$= 230.94^\circ$$

48.



$$\tan 60^\circ = \sqrt{3} = \frac{85}{x_1}$$

$$x_1 = \frac{85}{\sqrt{3}}$$

$$\tan 30^\circ = \frac{1}{\sqrt{3}} = \frac{85}{x_2}$$

$$x_2 = 85\sqrt{3}$$

$$x_2 = x_1 + x$$

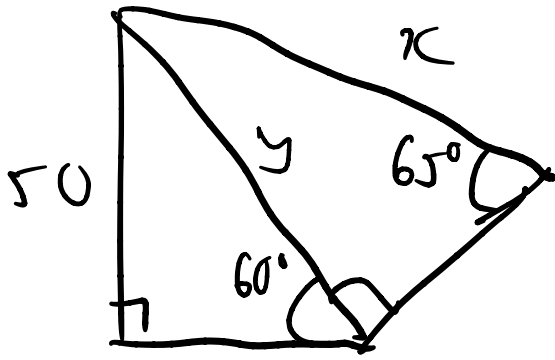
$$x = x_2 - x_1$$

$$= 85\sqrt{3} - \frac{85}{\sqrt{3}}$$

$$= \frac{85\sqrt{3}(\sqrt{3})}{\sqrt{3}} - \frac{85}{\sqrt{3}}$$

$$= \frac{170}{\sqrt{3}} \text{ or } 98.1$$

49.



$$\sin 60^\circ = \frac{50}{y}$$

$$\sin 60^\circ = \frac{\sqrt{3}}{2}$$

$$\frac{50}{y} = \frac{\sqrt{3}}{2}$$

$$y = \frac{100}{\sqrt{3}}$$

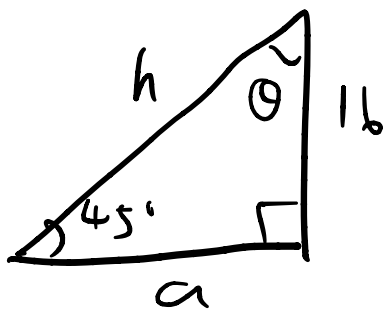
$$\sin 65^\circ = \frac{100}{x}$$

$$x = \frac{100}{\sin 65^\circ}$$

$$= 63.7$$

5) Solving a Right Triangle

37.



$$\tan 45^\circ = \frac{16}{a}$$

$$a = \frac{16}{\tan 45^\circ}$$

$$= \frac{16}{1}$$

$$= 16$$

$$\sin 45^\circ = \frac{16}{h}$$

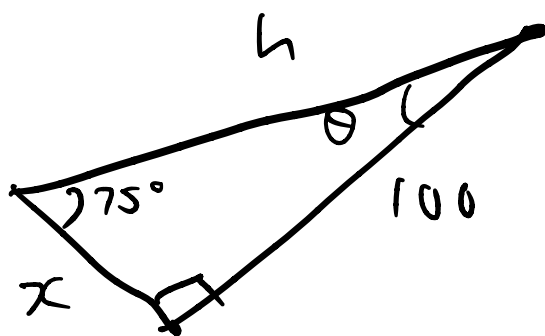
$$h = \frac{16}{\sin 45^\circ}$$

$$= \frac{16}{\frac{1}{\sqrt{2}}}$$

$$= 16\sqrt{2}$$

$$\theta = 45^\circ$$

38.



$$\theta = 90 - 75$$

$$= 15^\circ$$

$$\sin 75^\circ = \frac{100}{h}$$

$$h = \frac{100}{\sin 75^\circ}$$

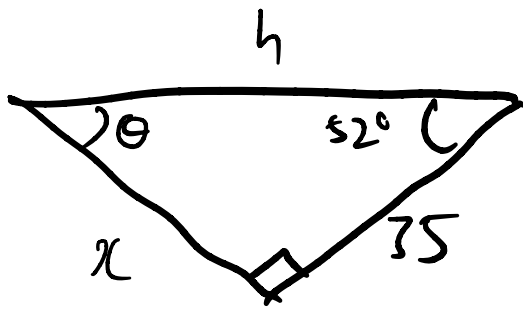
$$= 103.53$$

$$\tan 75^\circ = \frac{100}{x}$$

$$x = \frac{100}{\tan 75^\circ}$$

$$= 26.79$$

39.



$$\begin{aligned}\theta &= 90 - 52 \\ &= 38^\circ\end{aligned}$$

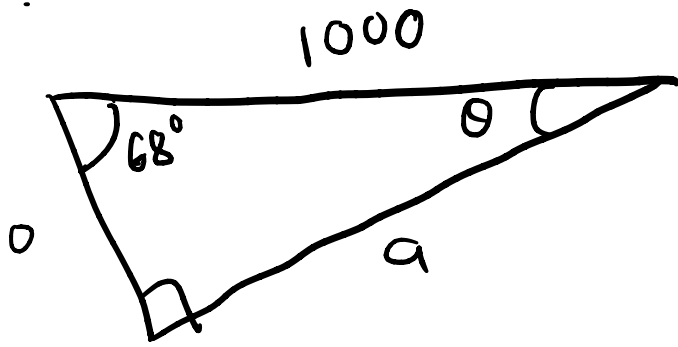
$$\tan 52^\circ = \frac{x}{35}$$

$$\begin{aligned}x &= 35 \tan 52^\circ \\ &= 44.80\end{aligned}$$

$$\cos 52^\circ = \frac{35}{h}$$

$$\begin{aligned}h &= \frac{35}{\cos 52^\circ} \\ &= 56.8\end{aligned}$$

40.



$$\theta = 180^\circ - 68^\circ - 90^\circ$$

$$= 22^\circ$$

$$\sin 22^\circ = \frac{a}{1000}$$

$$a = 1000 \sin 22^\circ$$

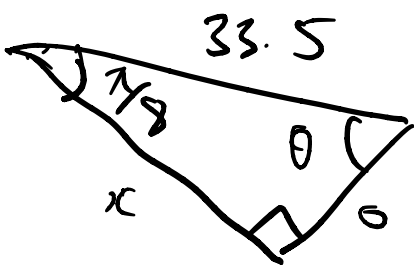
$$= 374.61$$

$$\cos 22^\circ = \frac{b}{1000}$$

$$b = 1000 \cos 22^\circ$$

$$= 927.18$$

41.



$$\theta = \frac{\pi}{2} - \frac{\pi}{8}$$

$$= \frac{3\pi}{8}$$

$$\sin \frac{\pi}{8} = \frac{x}{33.5}$$

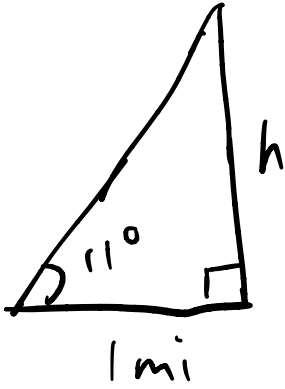
$$x = 12.82$$

$$\cos \frac{\pi}{8} = \frac{x}{59.5}$$

$$x = 30.95$$

53.

⑥ Applications



$$\tan 11^\circ = 0.19438$$

$$\tan 11^\circ = \frac{h}{1}$$

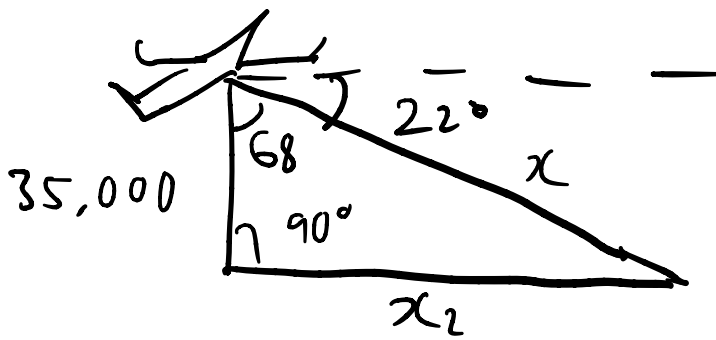
$$h = 0.19438 \text{ mi}$$

$$= 0.19438 \times 1609.344 \text{ m}$$

$$= 312.82 \text{ m}$$

$$\boxed{2} \sim 1026 \text{ ft}$$

54.



$$(a) \quad \cos 68^\circ = \frac{35000}{x}$$

$$x = \frac{35000}{\cos 68^\circ}$$

$$= 93451.4 \text{ ft}$$

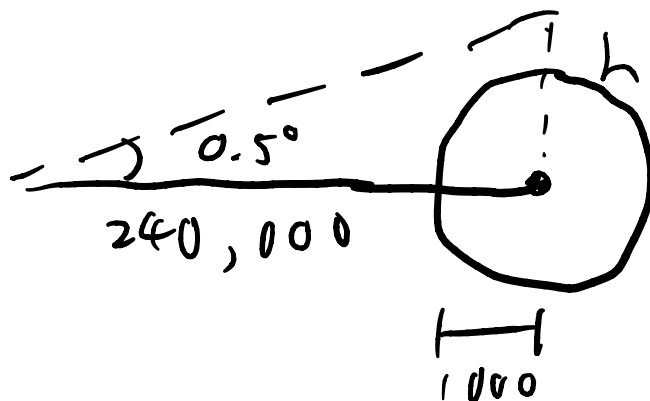
away

$$(b) \quad \tan 68^\circ = \frac{x_2}{35000}$$

$$x_2 = 35000 \tan 68^\circ$$

$$= 86628 \text{ ft}$$

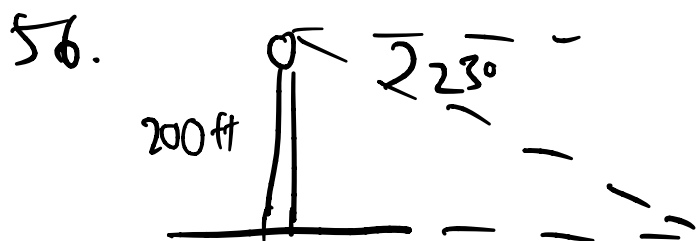
55.



$$(a) \quad \tan 0.5 = \frac{h}{240000}$$

$$h = 240000 \tan 0.5^\circ \\ = 2094.4 \text{ mi}$$

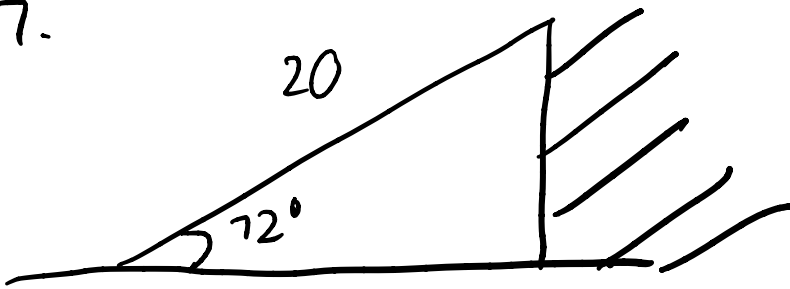
(b) No, because the beam diverges 2094 mi away from the center of the moon which is more than its radius



$$\tan 23^\circ = \frac{200}{x}$$

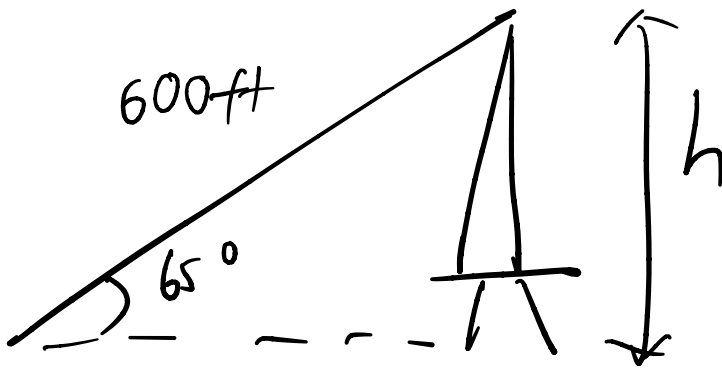
$$x = \frac{200}{\tan 23^\circ} \\ = 471.2 \text{ ft}$$

57.



$$\begin{aligned} h &= 20 \sin 72^\circ \\ &= 19.02 \text{ ft} \end{aligned}$$

58.



$$\begin{aligned} h &= 600 \sin 65^\circ \\ &= 543.78 \text{ ft} \end{aligned}$$

5.3 Trigonometric Functions of Angles

- ① Reference Angle
- ② Values of Trigonometric Functions
- ③ Expressing One Trigonometric Function in Terms of Another
- ④ Values of Trigonometric Functions II
- ⑤ Area of a Triangle
- ⑥ Applications

① Reference Angle

5. (a) 120° (b) 200° (c) 285°
 $\bar{\theta} = 60^\circ$ $\bar{\theta} = 20^\circ$ $\bar{\theta} = 75^\circ$

6. (a) 175° (b) 310° (c) 730°
 $\bar{\theta} = 5^\circ$ $\bar{\theta} = 360 - 310^\circ$ $= 730^\circ - 2(360^\circ)$
 $= 50^\circ$ $= 10^\circ$

7. (a) 225° (b) 810° (c) -165°
 $\bar{\theta} = 225^\circ - 180^\circ$ $\bar{\theta} = 810^\circ - 2(360^\circ)$ $\bar{\theta} = -165^\circ$
 $= 45^\circ$ $= 90^\circ$ $+ 180^\circ$
 $= 75^\circ$

8. (a) 99° (b) -199° (c) 359°
 $= 180^\circ - 99^\circ$ $360 - 199$ $360^\circ - 359^\circ$
 $= 81^\circ$ $= 161$ $= 1^\circ$
 $180^\circ - 161^\circ$
 $= 19^\circ$

9. (a) $\frac{7\pi}{10}$ (b) $\frac{9\pi}{8}$ (c) $\frac{10}{3}\pi$
 $\pi - \frac{7\pi}{10}$ $\frac{9\pi}{8} - \pi$ $\frac{10}{3}\pi - 3\pi$
 $= \frac{3}{10}\pi$ $= \frac{1}{8}\pi$ $= \frac{1}{3}\pi$

②/6 values of Trigonometric Functions

$$\begin{aligned} 13. \quad \cos 150^\circ \\ &= -\cos 30^\circ \\ &= -\frac{\sqrt{3}}{2} \end{aligned}$$

$$\begin{aligned} 16. \quad \sin(-30^\circ) \\ &= -\sin 30^\circ \\ &= -\frac{1}{2} \end{aligned}$$

$$\begin{aligned} 14. \quad \sin 240^\circ \\ \bar{\theta} = 240 - 180 \\ &= 60^\circ \end{aligned}$$

$$\begin{aligned} \sin 240^\circ &= -\sin 60^\circ \\ &= -\frac{\sqrt{3}}{2} \end{aligned}$$

$$\begin{aligned} 15. \quad \tan 330^\circ \\ \bar{\theta} = 360 - 330 \\ &= 30^\circ \end{aligned}$$

$$\begin{aligned} \tan 330^\circ &= -\tan 30^\circ \\ &= -\frac{1}{\sqrt{3}} \end{aligned}$$

$$16. \quad \sin(-30^\circ)$$

$$= -\sin 30^\circ$$

$$= -\frac{1}{2}$$

$$17. \quad \cot(-120^\circ)$$

$$= \frac{1}{\tan(-120^\circ)}$$

$$= \frac{1}{-\tan 120^\circ}$$

$$= \frac{1}{-(-\tan 60^\circ)}$$

$$= \frac{1}{\tan 60^\circ}$$

$$= \frac{1}{\frac{\sqrt{3}}{2}}$$

$$= \frac{2}{\sqrt{3}}$$

$$= \frac{2\sqrt{3}}{3}$$

$$37. \sin \theta < 0 \quad \text{and} \quad \cos \theta < 0$$

Quadrant 3

③ Expressing One Trigonometric Function in Terms of Another

41. $\tan \theta$, $\cos \theta$, θ in Quadrant III

$$\begin{aligned}\tan \theta &= \frac{\sin \theta}{\cos \theta} \\ &= \frac{-\sqrt{1 - \cos^2 \theta}}{\cos \theta}\end{aligned}$$

$$\sin^2 \theta + \cos^2 \theta = 1$$

$$\sin^2 \theta = 1 - \cos^2 \theta$$

$$\sin \theta = \pm \sqrt{1 - \cos^2 \theta}$$

42. $\cot \theta$, $\sin \theta$ in Quadrant II

$$\cot \theta = \pm \frac{1}{\sin \theta} \sqrt{1 - \sin^2 \theta}$$

\therefore Quadrant II

$$\cot \theta = - \frac{\sqrt{1 - \sin^2 \theta}}{\sin \theta}$$

$$1 + \cot^2 \theta = \csc^2 \theta$$

$$\cot \theta = \pm \sqrt{\csc^2 \theta - 1}$$

$$\cot \theta = \pm \sqrt{\frac{1}{\sin^2 \theta} - \frac{\sin^2 \theta}{\sin^2 \theta}}$$

$$= \pm \frac{1}{\sin \theta} \sqrt{1 - \sin^2 \theta}$$

43. $\cos \theta, \sin \theta$

$$\cos \theta = \sqrt{1 - \sin^2 \theta}$$

θ in Quadrant IV

$$\cos^2 \theta = 1 - \sin^2 \theta$$

$$\cos \theta = +\sqrt{1 - \sin^2 \theta}$$

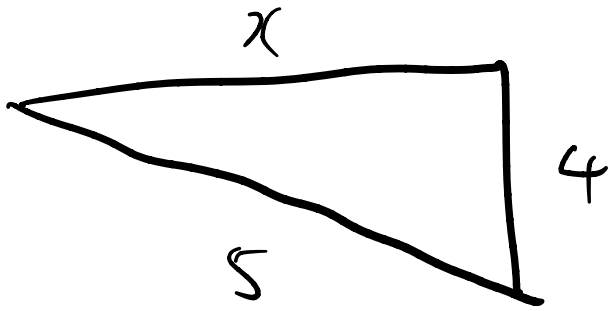
(Q4)

44. $\sec \theta, \sin \theta$ θ in Quadrant I

$$\begin{aligned} \sec \theta &= \frac{1}{\cos \theta} \\ &= \frac{1}{\sqrt{1 - \sin^2 \theta}} \end{aligned}$$

4/6 Values of Trigonometric Functions II

47. $\sin \theta = -\frac{4}{5}$, θ in Quadrant 4



$$x^2 + 4^2 = 5^2$$

$$x = \sqrt{5^2 - 4^2}$$
$$= 3$$

$$\cos \theta = \frac{3}{5}$$

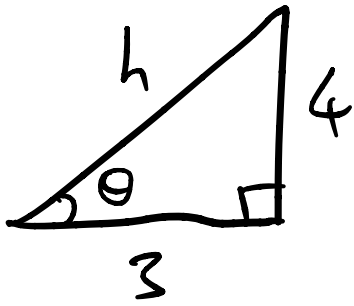
$$\tan \theta = -\frac{4}{3}$$

$$\csc \theta = -\frac{5}{4}$$

$$\sec \theta = \frac{5}{3}$$

$$\cot \theta = -\frac{3}{4}$$

$$48. \quad \tan \theta = \frac{4}{3} > \text{Quadrant III}$$



$$h = \sqrt{4^2 + 3^2}$$
$$= 5$$

$$\sin \theta = -\frac{4}{5}$$

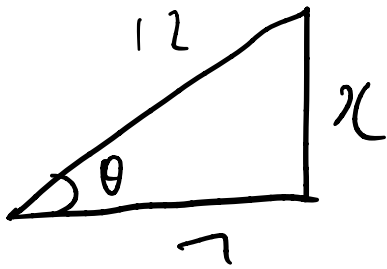
$$\cos \theta = -\frac{3}{5}$$

$$\csc \theta = -\frac{5}{4}$$

$$\sec \theta = -\frac{5}{3}$$

$$\cot \theta = \frac{3}{4}$$

$$49. \cos \theta = \frac{7}{12}, \quad \sin \theta < 0$$



$$7^2 + x^2 = 12^2$$

$$x = \sqrt{12^2 - 7^2} \\ = \sqrt{95}$$

$$\sin \theta = -\frac{\sqrt{95}}{12}$$

$$\tan \theta = -\frac{\sqrt{95}}{7}$$

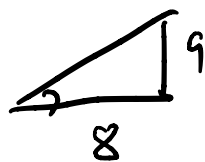
$$\csc \theta = -\frac{12}{\sqrt{95}}$$

$$\sec \theta = \frac{12}{7}$$

$$\cot \theta = -\frac{7}{\sqrt{95}}$$

$$50. \cot \theta = -\frac{8}{9}, \quad \cos \theta > 0$$

$$\tan \theta = -\frac{9}{8}$$



$$h = \sqrt{9^2 + 8^2} \\ = \sqrt{145}$$

$$\sin \theta = -\frac{9}{\sqrt{145}}$$

$$\cos \theta = \frac{8}{\sqrt{145}}$$

$$\csc \theta = -\frac{\sqrt{145}}{9}$$

$$\sec \theta = \frac{\sqrt{145}}{8}$$

51. $\csc \theta = 2$, θ in Quadrant I

$$\sin \theta = \frac{1}{2}$$

$$\begin{aligned}\theta &= \sin^{-1} \frac{1}{2} \\ &= 30^\circ\end{aligned}$$

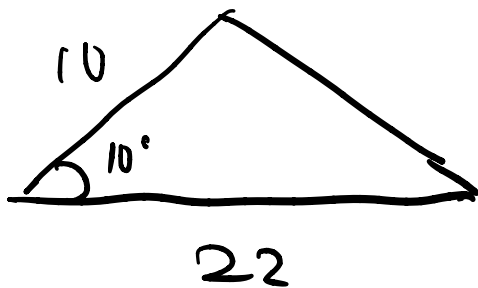
⑤ Area of a Triangle

$$57. \quad \frac{1}{2} ab \sin \theta$$

$$= \frac{1}{2} (9) (7 \sin 72^\circ)$$

$$= 29.96$$

58.

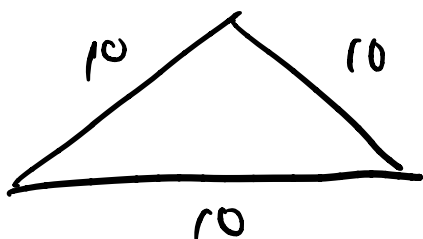


$$A = \frac{1}{2} ab \sin \theta$$

$$= \frac{1}{2} 22 (10 \sin 10^\circ)$$

$$= 19.10$$

59.



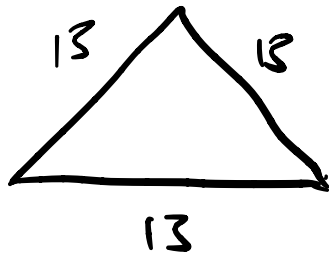
$$\theta = \frac{180}{3} = 60^\circ$$

$$A = \frac{1}{2} ab \sin \theta$$

$$= \frac{1}{2} 10 (10 \sin 60^\circ)$$

$$= 5 \left(10 \frac{\sqrt{3}}{2} \right) = 25\sqrt{3}$$

60.



$$A = \frac{1}{2} ab \sin \theta$$


$$= \frac{1}{2} (13) (13 \sin 60^\circ)$$

$$= \frac{1}{2} (13) (13) \left(\frac{\sqrt{3}}{2} \right)$$

$$= 73.179$$

$$= 73.18$$


61.



$$A = \frac{1}{2} ab \sin \theta$$

$$16 = \frac{1}{2} (7) (5 \sin \theta)$$

$$\sin \theta = \frac{32}{35}$$




$$\theta = \sin^{-1} \frac{32}{35}$$

$$= 66.10^\circ$$

6/6 Applications

65.



(a)

$$\tan \theta = \frac{h}{1 \text{ mi}}$$

$$h = \tan \theta (1 \text{ mi})$$

$$= 5280 \tan \theta \text{ ft}$$

(b) θ 20° 60° 80° 85°

h 1922 9145 29,944 60,751

66.



$$\text{Area of square} = 10 \times 10 \sin \theta = 100 \sin \theta$$

$$\begin{aligned} \text{Area of each triangle} &= h \times l \times \frac{1}{2} \\ &= 10 \sin \theta \times 10 \cos \theta \times \frac{1}{2} \\ &= 50 \sin \theta \cos \theta \end{aligned}$$

$$\begin{aligned} \text{Total Area } A(\theta) &= \text{square} + 2 \text{ triangles} \\ &= 100 \sin \theta + 2(50 \sin \theta \cos \theta) \\ &= 100 \sin \theta + 100 \sin \theta \cos \theta \end{aligned}$$

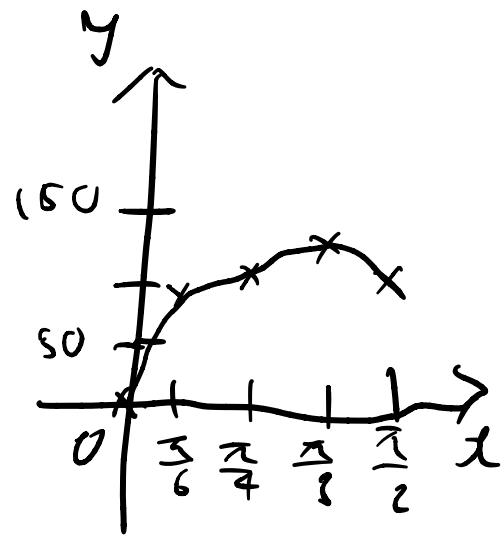
\therefore shown

(b) θ	0	$\frac{\pi}{6}$	$\frac{\pi}{4}$	$\frac{\pi}{3}$	π
A	0	93.3	120.71	129.90	100

$$\begin{aligned} A\left(\frac{\pi}{6}\right) &= 100\left(\frac{1}{2}\right) + 100\left(\frac{1}{2}\right)\left(\frac{\sqrt{3}}{2}\right) \\ &= 50 + 25\sqrt{3} \\ &= 93.3 \end{aligned}$$

$$\begin{aligned} A\left(\frac{\pi}{4}\right) &= 100\left(\frac{1}{\sqrt{2}}\right) + 100\left(\frac{1}{\sqrt{2}}\right)\left(\frac{1}{\sqrt{2}}\right) \\ &= \frac{100\sqrt{2}}{2} + \frac{100}{2} \\ &= 50\sqrt{2} + 50 \\ &= 120.71 \end{aligned}$$

$$\begin{aligned} A\left(\frac{\pi}{3}\right) &= 100\left(\frac{\sqrt{3}}{2}\right) + 100\left(\frac{\sqrt{3}}{2}\right)\left(\frac{1}{2}\right) = 100(1) + 0 \\ &= \frac{200\sqrt{3}}{4} + \frac{100\sqrt{3}}{4} = 100 \\ &= \frac{300\sqrt{3}}{4} \\ &= 129.90 \end{aligned}$$



$$A\left(\frac{\pi}{2}\right)$$

$$\begin{aligned} &= 100(1) + 0 \\ &= 100 \end{aligned}$$

$$(c) \quad \theta \approx \frac{\pi}{3}$$

2 from graph, largest

area is achieved

when $\theta \approx 1.047 \text{ rad} \approx 60^\circ$

$$67. \quad d = 20 \sin \theta$$

$$w = 20 \cos \theta$$

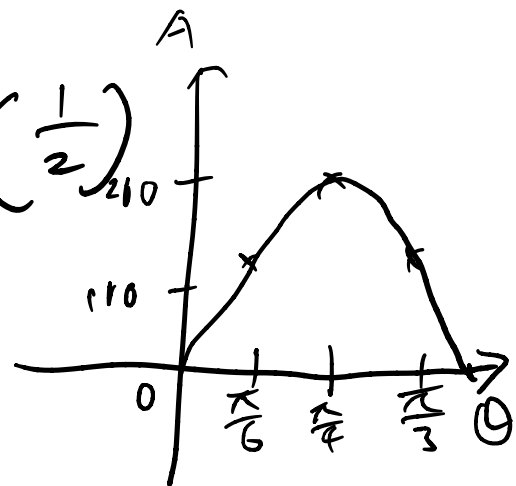
$$(a) \quad A(\theta) = 20 \sin \theta \times 20 \cos \theta \\ = 400 \sin \theta \cos \theta$$

$$(b) \quad A\left(\frac{\pi}{6}\right) = 20 \left(\frac{1}{2}\right) \times 20 \left(\frac{\sqrt{3}}{2}\right) \\ = 100\sqrt{3}$$

$$A\left(\frac{\pi}{4}\right) = 20 \left(\frac{1}{\sqrt{2}}\right) \times 20 \left(\frac{1}{\sqrt{2}}\right) \\ = 200$$

$$A\left(\frac{\pi}{3}\right) = 20 \left(\frac{\sqrt{3}}{2}\right) \times 20 \left(\frac{1}{2}\right) \\ = 100\sqrt{3}$$

$$A\left(\frac{\pi}{2}\right) = 20 \times 0 \\ = 0$$



$$\begin{aligned}
 (c) \quad d &= 20 \sin\left(\frac{\pi}{4}\right) \\
 &= 20 \left(\frac{1}{\sqrt{2}}\right) \\
 &= 10\sqrt{2}
 \end{aligned}$$

$$\begin{aligned}
 w &= 20 \sin\left(\frac{\pi}{4}\right) \\
 &= 10\sqrt{2}
 \end{aligned}$$

68. Strength of a beam \propto width and square of depth

$$\text{width} = 20 \cos \theta$$

$$\text{depth} = 20 \sin \theta$$

$$\begin{aligned}
 \therefore \text{Strength} &= k (20 \cos \theta) (20 \sin \theta)^2 \\
 &= 8000k \cos \theta \sin^2 \theta
 \end{aligned}$$

$$69. \quad R = \frac{V_0^2 \sin(2\theta)}{g}, \quad H = \frac{V_0^2 \sin^2 \theta}{2g}$$

$$\begin{aligned}
 (a) \quad R &= \frac{12^2 \sin\left(2\left(\frac{\pi}{6}\right)\right)}{32} & 3.897 \text{ ft} \\
 &= \frac{144 \left(\frac{\sqrt{3}}{2}\right)}{2} & \uparrow \\
 &= \frac{9 \cdot 3 \cdot 2 \left(\frac{\sqrt{3}}{2}\right)}{2} = \frac{9\sqrt{3}}{1} & \\
 H &= \frac{12^2 \left(\sin\frac{\pi}{6}\right)^2}{2(32)} & 0.5625 \text{ ft} \\
 &= \frac{144 \left(\frac{1}{2}\right)^2}{2(32)} & \uparrow \\
 &= \frac{18}{32} = \frac{9}{16} &
 \end{aligned}$$

$$(b) R = \frac{12^2 \sin\left(2\left(\frac{\pi}{6}\right)\right)}{5.2}$$

$$= 13.84615$$

solution says 23.982 ft

$$H = \frac{144\left(\frac{1}{2}\right)^2}{2(5.2)}$$

$$= 3.46 \text{ ft}$$

5.4 Inverse Trigonometric Functions and Right Triangles

① Evaluating Inverse Trigonometric Functions

② Evaluating Inverse Trigonometric Functions II

7 Sub-headers

① Evaluating Inverse Trigonometric Functions

$$5. (a) \sin^{-1} 1 = \frac{\pi}{2} \text{ rad} \quad (b) \cos^{-1} 0 = \frac{\pi}{2} \text{ rad}$$

$$(c) \tan^{-1} \sqrt{3} = \frac{\pi}{3} \text{ rad}$$

$$6. (a) \sin^{-1} 0 = 0 \text{ rad} \quad (b) \cos^{-1} (-1) = \pi \text{ rad}$$

$$(c) \tan^{-1} 0 = 0 \text{ rad}$$

$$7. (a) \sin^{-1} \left(-\frac{\sqrt{2}}{2} \right) = -\frac{\pi}{4} \text{ rad} \quad (b) \cos^{-1} \left(-\frac{\sqrt{2}}{2} \right) [0, \pi] = \frac{3\pi}{4} \text{ rad}$$

\therefore only defined between

$$\left[-\frac{\pi}{2}, \frac{\pi}{2} \right] (c) \tan^{-1} (-1) = -\frac{\pi}{4} \text{ rad}$$

$$8. \quad (a) \sin^{-1}\left(-\frac{\sqrt{3}}{2}\right) \quad (b) \cos^{-1}\left(-\frac{1}{2}\right)$$

$$= -\frac{\pi}{3} \text{ rad}$$

$$= \pi - \cos^{-1}\left(\frac{1}{2}\right)$$

$$= \pi - \frac{\pi}{3}$$

$$= \frac{2\pi}{3} \text{ rad}$$

$$(c) \tan^{-1}(-\sqrt{3})$$

$$= -\tan^{-1}(\sqrt{3})$$

$$= -\frac{\pi}{3} \text{ rad}$$

② Evaluating Inverse Trigonometric Functions I

$$9. \sin^{-1}(0.30) \\ = 0.30469$$

$$10. \cos^{-1}(-0.2) \\ = \pi - \cos^{-1}(0.2) \\ = 1.77215$$

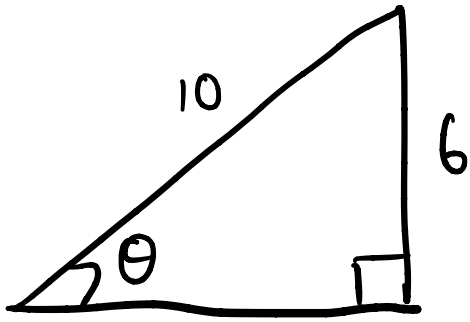
$$11. \cos^{-1}\frac{1}{3} \\ = 1.23096$$

$$12. \sin^{-1}\frac{5}{6} \\ = 0.98511$$

$$13. \tan^{-1}3 \\ = 1.24905$$

③ Finding Angles in Right Triangles

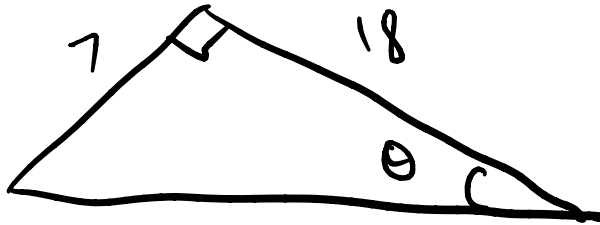
17.



$$\begin{aligned}\sin \theta &= \frac{6}{10} \\ &= \frac{3}{5}\end{aligned}$$

$$\sin^{-1} \frac{3}{5} = 36.9^\circ$$


18.



$$\tan \theta = \frac{7}{18}$$

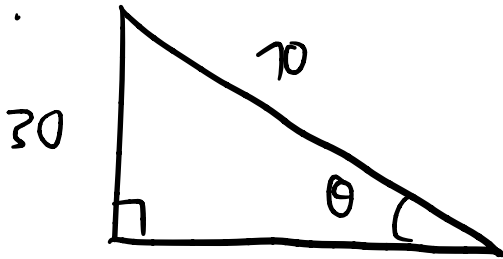
$$\begin{aligned}\theta &= \tan^{-1} \frac{7}{18} \\ &= 21.3^\circ\end{aligned}$$

19.



$$\begin{aligned}\tan \theta &= \frac{9}{13} \\ \theta &= \tan^{-1} \frac{9}{13} \\ &= 34.7^\circ\end{aligned}$$

20.

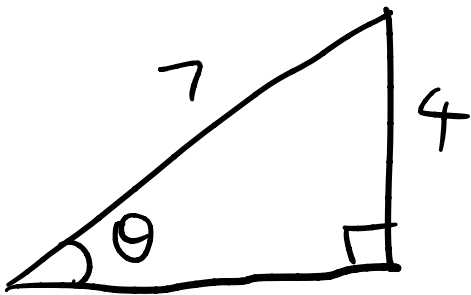


$$\sin \theta = \frac{30}{70}$$

$$\theta = \sin^{-1} \frac{3}{7}$$

$$= 25.4^\circ$$

21.

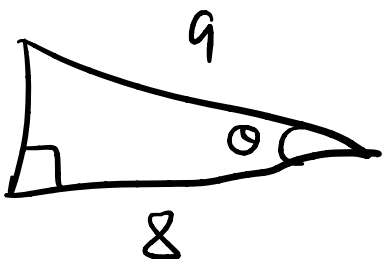


$$\sin \theta = \frac{4}{7}$$

$$\theta = \sin^{-1} \frac{4}{7}$$

$$= 34.8^\circ$$

22.



$$\cos \theta = \frac{8}{9}$$

$$\theta = \cos^{-1} \frac{8}{9}$$

$$= 27.3^\circ$$

④ Basic Trigonometric Equations

$$23. \sin \theta = \frac{2}{3}$$

$$\theta = \sin^{-1} \frac{2}{3}$$

$$= 41.8^\circ$$

$$180 - 41.8 = 138.2^\circ$$

$$\therefore \theta = 41.8^\circ, 138.2^\circ$$

$$24. \cos \theta = \frac{3}{4}$$

$$\theta = \cos^{-1} \frac{3}{4}$$

$$= 41.4^\circ$$

$$25. \cos \theta = -\frac{2}{5}$$

$$\theta = 180 - \cos^{-1} \frac{2}{5}$$

$$= 113.6^\circ$$

$$26. \tan \theta = -20$$

$$\theta = -\tan^{-1} 20$$

$$= -87.1^\circ$$

$$\theta = -87.1 + 180$$

$$= 92.9^\circ$$

$$27. \tan \theta = 5$$

$$\theta = \tan^{-1} 5$$

$$= 78.7^\circ$$

$$28. \sin \theta = \frac{4}{5}$$

$$\theta = \sin^{-1} \frac{4}{5}$$

$$= 53.1^\circ$$

$$180^\circ - 53.1^\circ = 126.9^\circ$$

$$\therefore \theta = 53.1^\circ, 126.9^\circ$$

5) Value of an expression

$$\begin{aligned} 29. \quad & \cos \left(\sin^{-1} \frac{4}{5} \right) \\ &= \sqrt{1 - \sin^2 \left(\sin^{-1} \frac{4}{5} \right)} \\ &= \sqrt{1 - \left(\frac{4}{5} \right)^2} \\ &= \sqrt{\frac{25}{25} - \frac{16}{25}} \\ &= \frac{3}{5} \end{aligned}$$

$$\begin{aligned} \cos^2 \theta + \sin^2 \theta &= 1 \\ \cos^2 \theta &= 1 - \sin^2 \theta \\ \cos \theta &= \sqrt{1 - \sin^2 \theta} \\ \therefore \cos \theta &\text{ is positive} \\ &\text{between } \left[-\frac{\pi}{2}, \frac{\pi}{2} \right] \end{aligned}$$

$$\begin{aligned} 30. \quad & \cos \left(\tan^{-1} \frac{4}{3} \right) \\ &= \frac{1}{\sqrt{\tan^2 \left(\tan^{-1} \frac{4}{3} \right) + 1}} \\ &= \frac{1}{\sqrt{\left(\frac{4}{3} \right)^2 + \frac{9}{9}}} \\ &= \frac{1}{\frac{5}{3}} \\ &= \frac{3}{5} \end{aligned}$$

$$\begin{aligned} \tan^2 \theta + 1 &= \sec^2 \theta \\ \frac{1}{\cos^2 \theta} &= \tan^2 \theta + 1 \\ \cos^2 \theta &= \frac{1}{\tan^2 \theta + 1} \\ \cos \theta &= \pm \sqrt{\frac{1}{\tan^2 \theta + 1}} \\ &\left(\tan^{-1} \text{ is defined} \right. \\ &\quad \left. \text{between } \left[-\frac{\pi}{2}, \frac{\pi}{2} \right] \right. \\ &\quad \left. \text{which } \cos \theta \text{ is positive} \right) \end{aligned}$$

$$31. \sec\left(\sin^{-1}\frac{12}{13}\right)$$

$$\text{Let } u = \sin^{-1}\frac{12}{13},$$

$$\begin{aligned}\sec u &= \frac{1}{\sqrt{1 - \sin^2 u}} \\ &= \frac{1}{\sqrt{1 - \left(\sin\left(\sin^{-1}\frac{12}{13}\right)\right)^2}} \\ &= \frac{1}{\sqrt{1 - \left(\frac{12}{13}\right)^2}} \\ &= \frac{1}{\frac{5}{13}} \\ &= \frac{13}{5}\end{aligned}$$

$$\begin{aligned}\sec \theta &= \frac{1}{\cos \theta} \\ &= \frac{1}{\sqrt{1 - \sin^2 \theta}}\end{aligned}$$

$$32. \csc\left(\cos^{-1}\frac{7}{25}\right)$$

$$\text{Let } \cos^{-1}\frac{7}{25} = u,$$

$$\begin{aligned}\csc(u) &= \frac{1}{\sqrt{1 - \cos^2 u}} \\ &= \frac{1}{\sqrt{1 - \left(\cos\left(\cos^{-1}\frac{7}{25}\right)\right)^2}} = \frac{25}{24}\end{aligned}$$

$$\begin{aligned}\csc \theta &= \frac{1}{\sin \theta} \\ &= \frac{1}{\sqrt{1 - \cos^2 \theta}}\end{aligned}$$

⑥ Algebraic Expressions

$$\begin{aligned} 35. \cos(\sin^{-1}x) &= \sqrt{1 - \sin^2(\sin^{-1}x)} \\ &= \sqrt{1 - (x)^2} \\ &= \sqrt{(1+x)(1-x)} \end{aligned}$$

$$\begin{aligned} \cos \theta &= \pm \sqrt{1 - \sin^2 \theta} \\ \therefore \sin^{-1} \theta &\text{ only defined} \\ &\text{between } \left[\frac{\pi}{2}, \frac{\pi}{2} \right] \\ \therefore \cos \theta &= \sqrt{1 - \sin^2 \theta} \end{aligned}$$

$$\begin{aligned} 36. \sin(\tan^{-1}x) & \\ \text{Let } u &= \tan^{-1}x, \\ \sin(\tan^{-1}x) &= \pm \frac{\tan(\tan^{-1}x)}{\sqrt{\tan^2(\tan^{-1}x) + 1}} \\ &= \pm \frac{x}{\sqrt{x^2 + 1}} \end{aligned}$$

$$\begin{aligned} 1 + \cot^2 u &= \csc^2 u \\ \frac{1}{\sin^2 u} &= 1 + \frac{1}{\tan^2 u} \\ &= \frac{\tan^2 u + 1}{\tan^2 u} \\ \sin^2 u &= \frac{\tan^2 u}{\tan^2 u + 1} \\ \sin u &= \pm \frac{\tan u}{\sqrt{\tan^2 u + 1}} \end{aligned}$$

$$\boxed{2} \sin(\tan^{-1}x) = \frac{x}{\sqrt{x^2 + 1}}$$

$$37. \tan(\sin^{-1}x)$$

$$\text{Let } \sin^{-1}x = u,$$

$$\begin{aligned}\tan u &= \frac{\sin u}{\sqrt{1 - \sin^2 u}} \\ &= \frac{\sin(\sin^{-1}x)}{\sqrt{1 - (\sin(\sin^{-1}x))^2}} \\ &= \frac{x}{\sqrt{1 - x^2}}\end{aligned}$$

$$38. \cos(\tan^{-1}x)$$

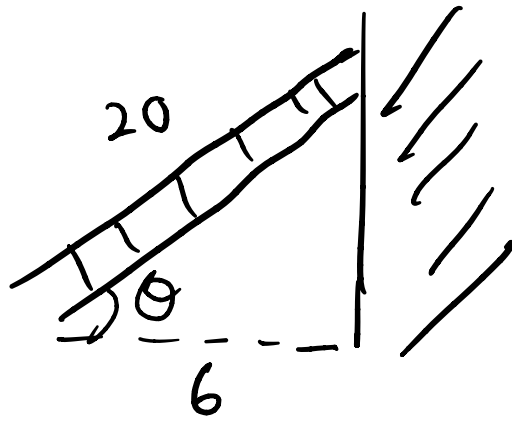
$$\begin{aligned}&= \frac{1}{\sqrt{(\tan(\tan^{-1}x))^2 + 1}} \\ &= \frac{1}{\sqrt{x^2 + 1}}\end{aligned}$$

$$\begin{aligned}\tan \theta &= \frac{\sin \theta}{\cos \theta} \\ &= \frac{\sin \theta}{\sqrt{1 - \sin^2 \theta}}\end{aligned}$$

$$\begin{aligned}\tan^2 \theta + 1 &= \sec^2 \theta \\ \cos^2 \theta &= \frac{1}{\tan^2 \theta + 1} \\ \cos \theta &= \frac{1}{\sqrt{\tan^2 \theta + 1}}\end{aligned}$$

⑦ Applications

39.




$$\cos \theta = \frac{6}{20}$$

$$\begin{aligned}\therefore \theta &= \cos^{-1} \frac{3}{10} \\ &= 72.54^\circ\end{aligned}$$

$$\begin{aligned}\therefore h &= 20 \sin 72.54^\circ \\ &= 19.08 \text{ ft}\end{aligned}$$

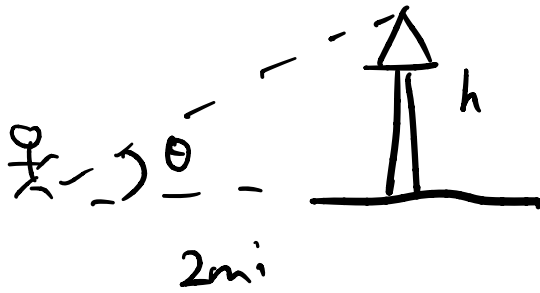
40.



$$\tan \theta = \frac{96}{120}$$

$$\theta = 38.66^\circ$$

41.

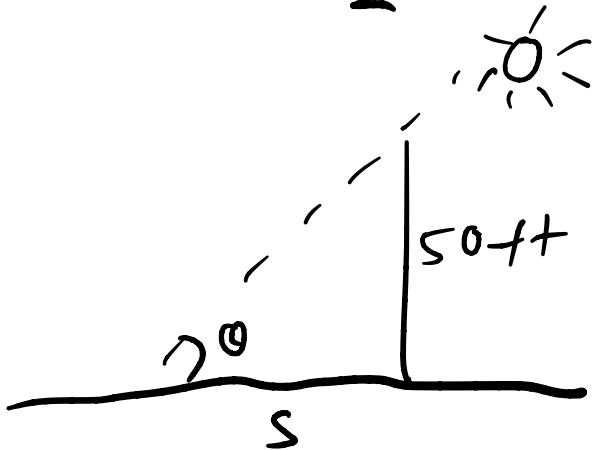


$$(a) h = 2 \tan \theta$$

$$(b) \tan \theta = \frac{h}{2}$$

$$\theta = \tan^{-1} \frac{h}{2}$$

42.



$$(a) \tan \theta = \frac{50}{s}$$

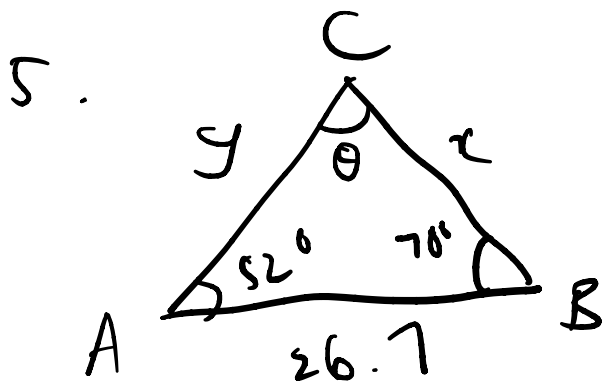
$$\theta = \tan^{-1} \frac{50}{s}$$

$$(b) s = 20 \text{ ft},$$

$$\theta = \tan^{-1} \frac{50}{20}$$

$$= 68.2 \text{ ft}$$

5.5 The Law of Sines



$$\begin{aligned}\theta &= 180 - 70 - 52^\circ \\ &= 58^\circ\end{aligned}$$

$$\frac{\sin A}{x} = \frac{\sin C}{26.7}$$

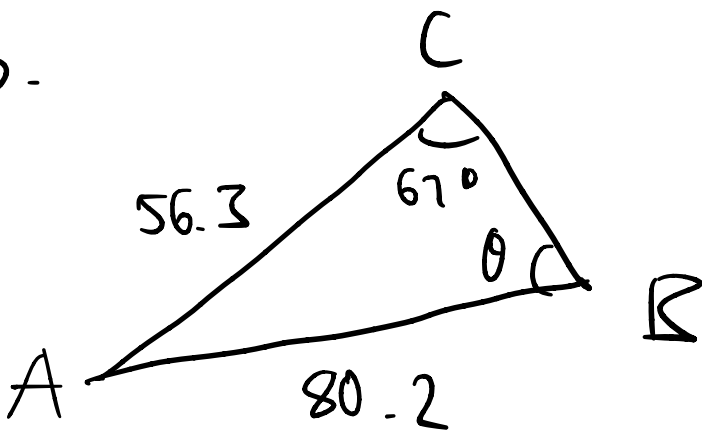
$$\frac{\sin 52^\circ}{x} = \frac{\sin \theta}{26.7}$$

$$\frac{\sin 52^\circ}{x} = \frac{\sin 58^\circ}{26.7}$$

$$x = \sin 52^\circ / \frac{\sin 58^\circ}{26.7}$$

$$= 24.8$$

6.



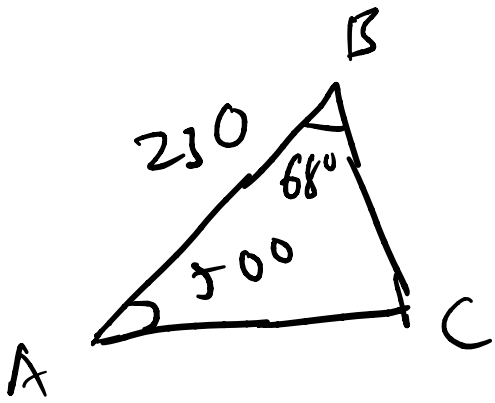
$$\frac{\sin C}{c} = \frac{\sin \theta}{56.3}$$

$$\frac{\sin 67^\circ}{80.2} = \frac{\sin \theta}{56.3}$$

$$\sin \theta = 56.3 \left(\frac{\sin 67^\circ}{80.2} \right)$$

$$\theta = 40.3^\circ$$

$$13. \quad \angle A = 50^\circ, \quad \angle B = 68^\circ, \quad c = 230$$



$$\begin{aligned}\angle C &= 180 - 50 - 68 \\ &= 62^\circ\end{aligned}$$

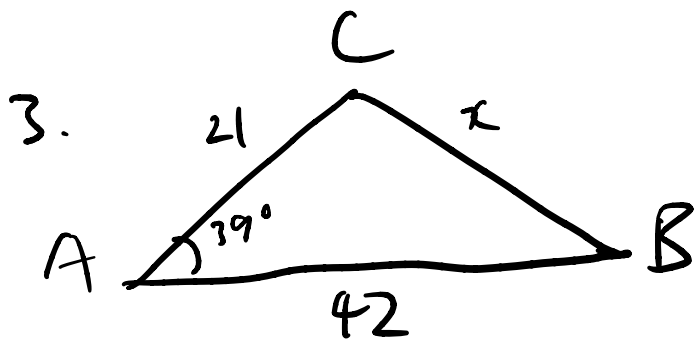
$$\frac{\sin A}{a} = \frac{\sin 62^\circ}{230}$$

$$\begin{aligned}a &= \frac{230 \sin 50^\circ}{\sin 62^\circ} \\ &= 199.5\end{aligned}$$

$$\frac{\sin B}{b} = \frac{\sin 62^\circ}{230}$$

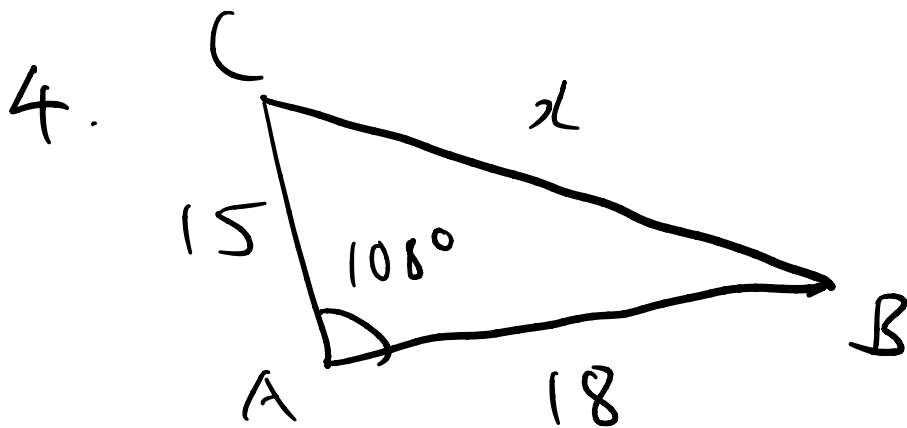
$$\begin{aligned}b &= \frac{230 \sin 68^\circ}{\sin 62^\circ} \\ &= 241.5\end{aligned}$$

5.6 The Law of Cosines



$$\begin{aligned}x^2 &= 21^2 + 42^2 - 2(21)(42)\cos 39^\circ \\ &= 834.11\end{aligned}$$

$$x = 28.9$$



$$x^2 = 15^2 + 18^2 - 2(15)(18)\cos 108^\circ$$

$$x = 26.8$$

Chapter 9 Vectors in Two and Three Dimensions

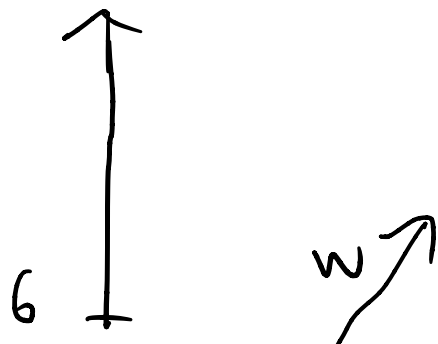
8 Examples

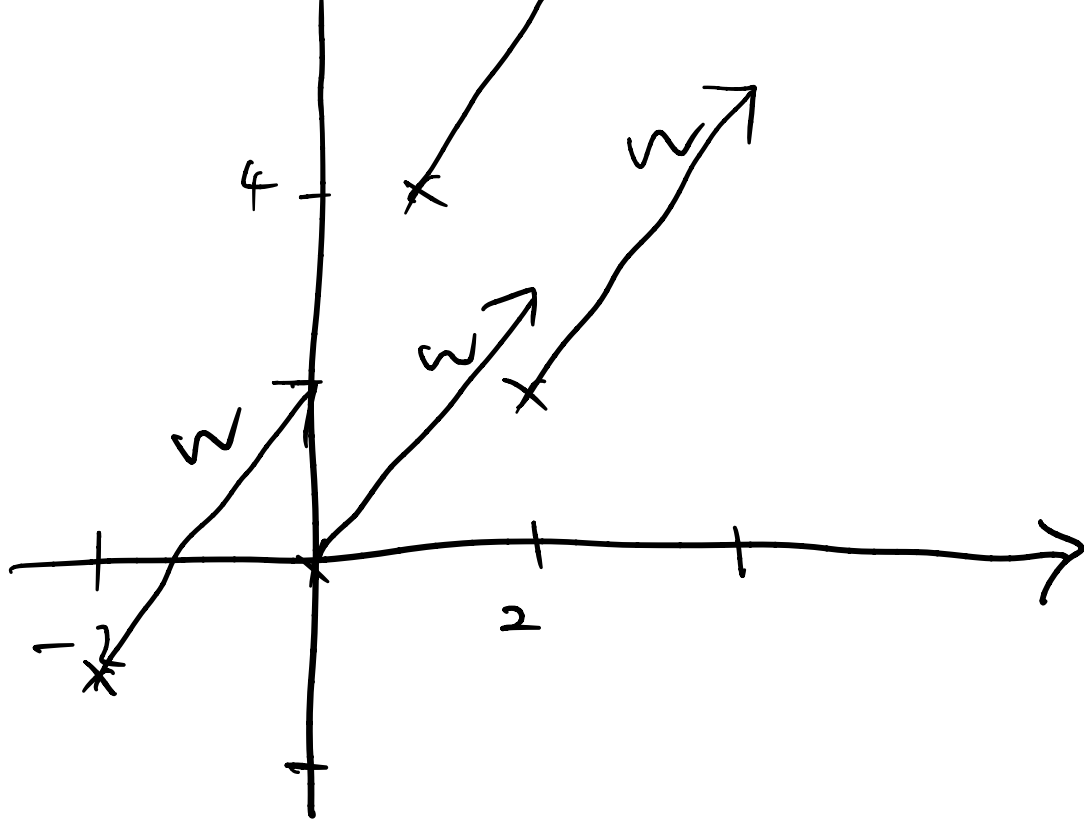
Example 1 Describing Vectors in Component Form

$$(a) \quad u = \langle 3 - (-2), 7 - 5 \rangle \\ = \langle 5, 2 \rangle$$

$$(b) \quad v = \langle 3, 7 \rangle, \text{ initial point } (2, 4) \\ \text{terminal point } (2 + 3, 4 + 7) \\ = (5, 11)$$

$$(c) \quad w = \langle 2, 3 \rangle$$



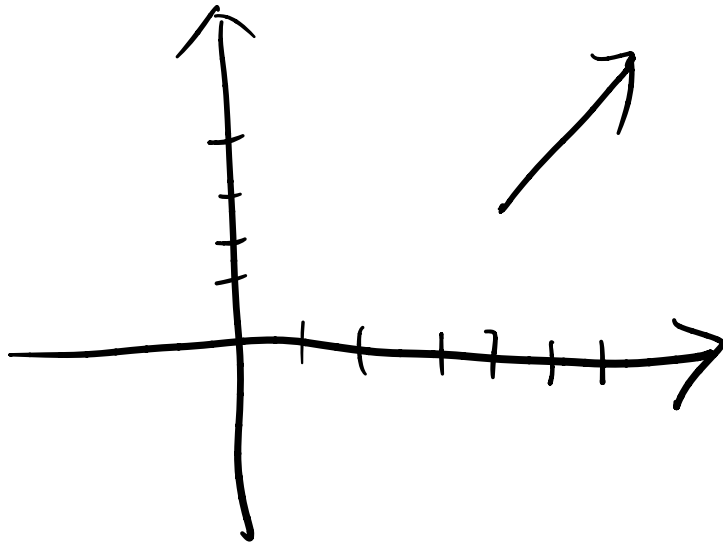


9. 1

11. $P(1, 2), Q(4, 1)$

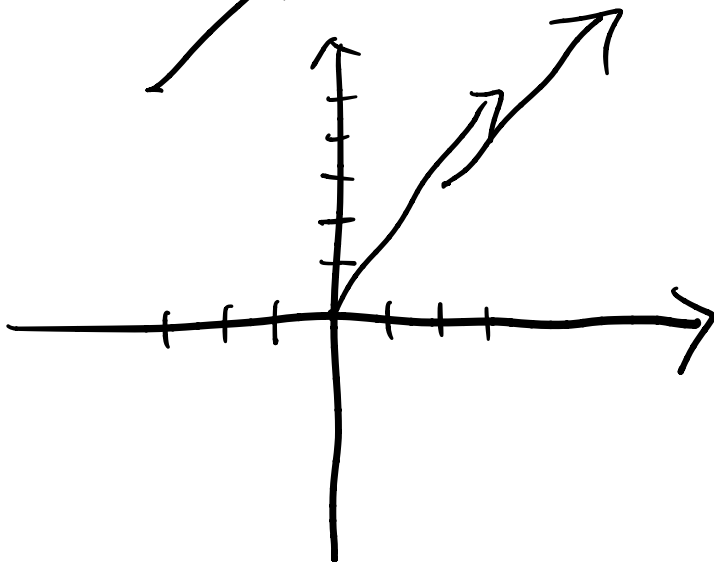
$$\vec{V} = \langle 3, 1 \rangle$$

19. $u = \langle 2, 4 \rangle$



$$v = \langle 6, 7 \rangle$$

23. $u = \langle 3, 5 \rangle$



$$37. \quad u = 2i + j, \quad v = 3i - 2j \quad 3/4/2024$$

$$|u| = \sqrt{2^2 + 1^2} \\ = \sqrt{5}$$

$$|v| = \sqrt{3^2 + (-2)^2} \\ = \sqrt{13}$$

$$2u = 2(2i + j) \\ = 4i + 2j$$

$$|2u| = \sqrt{4^2 + 2^2} \\ = 2\sqrt{5}$$

$$|\frac{1}{2}v| = |\frac{1}{2}| |v| \\ = \frac{1}{2} \sqrt{13} \\ = \frac{\sqrt{13}}{2}$$

$$|u+v|,$$

$$u+v = (2i+j) + (3i-2j) \\ = 5i - j$$

$$|u+v| \\ = \sqrt{5^2 + (-1)^2} \\ = \sqrt{26}$$

$$|u-v|,$$

$$u-v = (2i+j) - (3i-2j) \\ = -i + 3j$$

$$|u-v| \\ = \sqrt{(-1)^2 + (3)^2} \\ = \sqrt{10}$$

$$|u| - |v| \\ = \sqrt{5} - \sqrt{13}$$

$$31. \quad u = \langle 2, 7 \rangle, \quad v = \langle 3, 1 \rangle$$

$$2u = \langle 2(2), 2(7) \rangle$$

$$= \langle 4, 14 \rangle$$

$$-3v = \langle -9, -3 \rangle$$

$$u+v = \langle 2+3, 7+1 \rangle$$

$$= \langle 5, 8 \rangle$$

$$3u - 4v = \langle 6, 21 \rangle - \langle 12, 4 \rangle$$

$$= \langle 6-12, 21-4 \rangle$$

$$= \langle -6, 17 \rangle$$

$$27. \quad u = \langle 1, 4 \rangle$$

$$u = i + 4j$$

$$35. \quad u = 2i, \quad v = 3i - 2j$$

$$\begin{aligned} 2u &= 2(2i) \\ &= 4i \end{aligned}$$

$$\begin{aligned} -3v &= -3(3i - 2j) \\ &= -9i + 6j \end{aligned}$$

$$\begin{aligned} u + v &= 2i + 3i - 2j \\ &= 5i - 2j \end{aligned}$$

$$\begin{aligned} 3u - 4v &= 3(2i) - 4(3i - 2j) \\ &= 6i - 12i + 8j \\ &= -6i + 8j \end{aligned}$$

$$41. \quad |v| = 40, \quad \theta = 30^\circ$$

$$v = a_1 i + a_2 j$$

$$\begin{aligned} a_1 &= |v| \cos \theta \\ &= 40 \cos 30 \\ &= 40 \left(\frac{\sqrt{3}}{2} \right) \\ &= 20\sqrt{3} \end{aligned}$$

$$\begin{aligned} a_2 &= |v| \sin \theta \\ &= 40 \sin 30 \\ &= 40 \left(\frac{1}{2} \right) \\ &= 20. \end{aligned}$$

$$v = 20\sqrt{3}i + 20j$$

$$51. \quad v = i + \sqrt{3}j$$

$$|v| = \sqrt{1^2 + \sqrt{3}^2}$$
$$= 2$$

$$\theta = \tan^{-1} \frac{\sqrt{3}}{1}$$
$$= 60^\circ$$

59.

Velocity V ,

$$V_x = 425 \text{ mi/h}$$

$$V_y = 40 \text{ mi/h}$$

$$(a) \quad V_y = 40j$$

$$(b) \quad V_x = 425i$$

$$(c) \quad V = 425i + 40j$$

$$(d) \quad |v| = \sqrt{425^2 + 40^2}$$
$$= 426.88 \text{ mi/h}$$

$$\theta = \tan^{-1} \frac{40}{425}$$
$$= 5.38^\circ$$

\therefore Speed is 426.9 mi/h
at 5.38° above the
x-axis

$$57. \quad V_x = -300 \text{ mi/h}$$

$$V_y = 30 \text{ mi/h}$$

$$V = -300i + 30j$$

$$\text{Ref } \theta = \tan^{-1} \frac{30}{-300}$$

$$= 5.71^\circ$$

$$\theta = 180^\circ - 5.71$$

$$= 174.29^\circ$$

\therefore The airplane should head in a direction of 185.71° above the x -axis to arrive at a point due west.

$$67. F_1 = \langle 2, 5 \rangle, F_2 = \langle 3, -8 \rangle$$

(a)

$$\begin{aligned} F_1 + F_2 &= \langle 2, 5 \rangle + \langle 3, -8 \rangle \\ &= \langle 5, -3 \rangle \end{aligned}$$

$$\therefore \Sigma F = \langle 5, -3 \rangle$$

(b) If in equilibrium,

$$F_1 + F_2 + F = 0$$

$$\therefore F = \langle -5, 3 \rangle$$

9.2

5. (a)

$$u = \langle 2, 0 \rangle, \quad v = \langle 1, 1 \rangle$$

$$\begin{aligned} u \cdot v &= a_1 b_1 + a_2 b_2 \\ &= 2 \cdot 1 + 0 \cdot 1 \\ &= 2 \end{aligned}$$

11. (a) $u = -5j, \quad v = -i - \sqrt{3}j$

$$\begin{aligned} u \cdot v &= 0 \cdot (-1) + (-5) \cdot (-\sqrt{3}) \\ &= 0 + 5\sqrt{3} \\ &= 5\sqrt{3} \end{aligned}$$

5. (b)

$$\begin{aligned} u \cdot v &= |u| |v| \cos \theta \\ \cos \theta &= \frac{u \cdot v}{|u| |v|} \end{aligned}$$

$|u| = \sqrt{2^2 + 0^2}$
 $= 2$
 $|v| = \sqrt{1^2 + 1^2}$
 $= \sqrt{2}$

$$\begin{aligned} &= \frac{2}{2\sqrt{2}} \\ &= \frac{2\sqrt{2}}{4} = \frac{\sqrt{2}}{2} \end{aligned}$$

$$11. (b) \quad u \cdot v = |u| |v| \cos \theta$$

$$\cos \theta = \frac{u \cdot v}{|u| |v|}$$

$$= \frac{5\sqrt{3}}{(5)(2)}$$

$$= \frac{\sqrt{3}}{2}$$

$$|u| = \sqrt{0^2 + (-5)^2} \\ = 5$$

$$|v| = \sqrt{(-1)^2 + (-\sqrt{3})^2} \\ = 2$$

$$15. \quad u = \langle 6, 4 \rangle, \quad v = \langle -2, 3 \rangle$$

$$u \cdot v = |u| |v| \cos \theta \quad |u| = \sqrt{6^2 + 4^2} \\ = \sqrt{52}$$

$$\cos \theta = \frac{u \cdot v}{|u| |v|} \quad = 2\sqrt{13}$$

$$= \frac{6(-2) + 4(3)}{2\sqrt{13} \cdot \sqrt{13}} \quad |v| = \sqrt{(-2)^2 + 3^2} \\ = \sqrt{13}$$

$$= 0$$



$$\theta = \frac{\pi}{2} \quad \therefore \text{They are perpendicular}$$

17. $u = \langle -2, -6 \rangle$, $v = \langle 4, 2 \rangle$

$$\cos \theta = \frac{u \cdot v}{|u||v|}$$

$$\begin{aligned} u \cdot v &= (-2)(4) + (-6)(2) \\ &= -8 - 12 \\ &= -20 \end{aligned}$$

\therefore not perpendicular



$$|u| = 490 \text{ lb}$$

$$W \cos \theta = |u|$$

$$\begin{aligned} W &= \frac{|u|}{\cos \theta} \\ &= \frac{490}{\cos 80} \\ &= 2821.80 \text{ lb} \end{aligned}$$

$$W \sin \theta = \bar{F}$$

$$2821.80 \sin 80^\circ = 2778.93 \text{ lb}$$

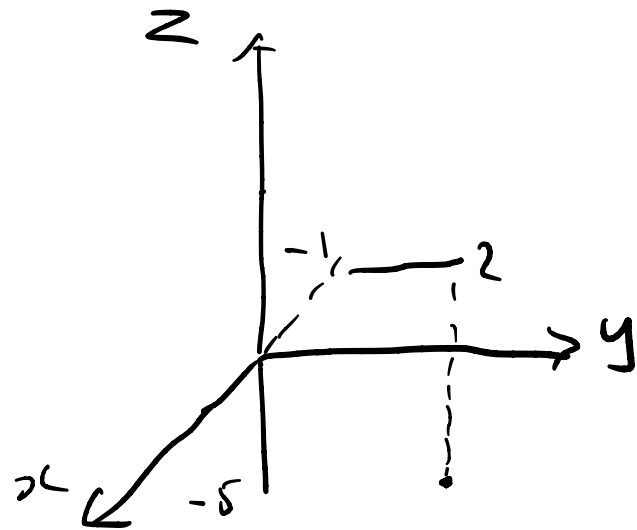
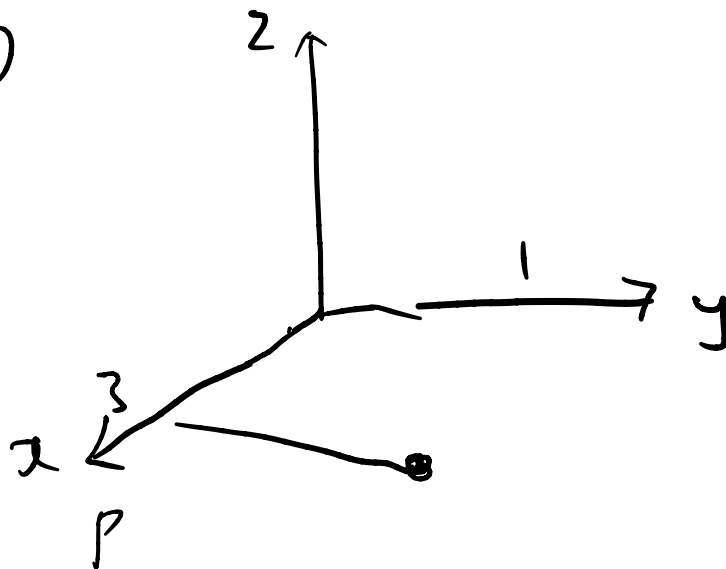
25. $u = \langle 4, 6 \rangle$, $v = \langle 3, -4 \rangle$

$$\begin{aligned} |u| \cos \theta &= \frac{u \cdot v}{|v|} \\ &= \frac{4(3) + (6)(-4)}{\sqrt{3^2 + (-4)^2}} \\ &= \frac{12 - 24}{5} = -\frac{12}{5} \end{aligned}$$

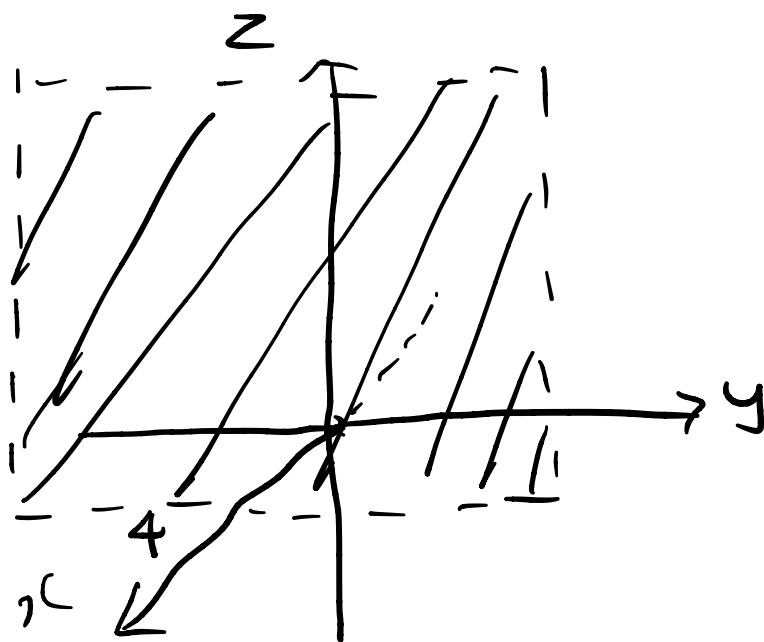
9.3

3. $P(3, 1, 0)$, $Q(-1, 2, -5)$

(a)



7. $x = 4$



parallel to yz -plane
and 4 units in front
of it

(b)
 $d(P, Q)$

$$= \sqrt{(x_2 - x_1)^2 + (y_2 - y_1)^2 + (z_2 - z_1)^2}$$

$$= \sqrt{(3 - (-1))^2 + (1 - 2)^2 + (0 - (-5))^2}$$

$$= \sqrt{4^2 + (-1)^2 + 5^2}$$

$$= \sqrt{42}$$

$$11. \quad r = 5 ; \quad C(2, -5, 3)$$

$$(x - x_1)^2 + (y - y_1)^2 + (z - z_1)^2 = r^2$$

$$(x - 2)^2 + (y - (-5))^2 + (z - 3)^2 = 5^2$$

$$\therefore (x - 2)^2 + (y + 5)^2 + (z - 3)^2 = 25$$

$$15. \quad x^2 + y^2 + z^2 - 10x + 2y + 8z = 9$$

$$x^2 - 10x + \left(\frac{10}{2}\right)^2 - \left(\frac{10}{2}\right)^2 + y^2 + 2y + \left(\frac{2}{2}\right)^2 - \left(\frac{2}{2}\right)^2 \\ + z^2 + 8z + \left(\frac{8}{2}\right)^2 - \left(\frac{8}{2}\right)^2 = 9$$

$$(x - 5)^2 + (y + 1)^2 + (z + 4)^2 = 9 + 25 + 1 + 16$$

$$(x - 5)^2 + (y + 1)^2 + (z + 4)^2 = \sqrt{51}^2$$

\therefore Center of $(5, -1, -4)$ with radius $\sqrt{51}$

$$19. \quad (x+1)^2 + (y-2)^2 + (z+10)^2 = 10^2$$

(a) yz plane

$$x = 0,$$

$$(0+1)^2 + (y-2)^2 + (z+10)^2 = 100$$

$$(y-2)^2 + (z+10)^2 = 99$$

$$(y-2)^2 + (z+10)^2 = (3\sqrt{11})^2$$

there is a circle in the yz plane
of center $(0, 2, -10)$ and radius
 $3\sqrt{11}$

$$(b) \quad (4+1)^2 + (y-2)^2 + (z+10)^2 = 100$$

$$(y-2)^2 + (z+10)^2 = (5\sqrt{3})^2$$

\therefore a circle in the yz plane
of center $(4, 2, -10)$ with
radius $5\sqrt{3}$

9.4

$$3. \quad P(1, -1, 0), \quad Q(0, -2, 5)$$

$$\begin{aligned} v &= \langle 0 - 1, -2 - (-1), 5 - 0 \rangle \\ &= \langle -1, -1, 5 \rangle \end{aligned}$$

$$7. \quad v = \langle 3, 4, -2 \rangle, \quad P(2, 0, 1)$$

$$\begin{aligned} Q &= (2 + 3, 0 + 4, 1 + (-2)) \\ &= (5, 4, -1) \end{aligned}$$

$$11. \quad v = \langle -2, 1, 2 \rangle$$

$$\begin{aligned} |v| &= \sqrt{(-2)^2 + (1)^2 + (2)^2} \\ &= 3 \end{aligned}$$

$$15. \quad u = \langle 2, -7, 3 \rangle, \quad v = \langle 0, 4, -1 \rangle$$

$$\begin{aligned} u + v &= \langle 2 + 0, -7 + 4, 3 + (-1) \rangle \\ &= \langle 2, -3, 2 \rangle \end{aligned}$$

$$\begin{aligned}u-v &= \langle 2-0, -7-4, 3-(-1) \rangle \\ &= \langle 2, -11, 4 \rangle\end{aligned}$$

$$\begin{aligned}3u - \frac{1}{2}v &= 3\langle 2, -7, 3 \rangle - \frac{1}{2}\langle 0, 4, -1 \rangle \\ &= \langle 6, -21, 9 \rangle - \langle 0, 2, -\frac{1}{2} \rangle \\ &= \langle 6, -23, 9\frac{1}{2} \rangle\end{aligned}$$

$$19. \langle 12, 0, 2 \rangle$$

$$v = 12i + 2k$$

$$23. u = \langle 0, -2, 1 \rangle, v = \langle 1, -1, 0 \rangle$$

$$\begin{aligned}(a) \quad -2u + 3v &= \langle -2(0) + 3(1), -2(-2) + 3(-1), \\ &\quad -2(1) + 3(0) \rangle \\ &= \langle 3, 1, -2 \rangle\end{aligned}$$

$$(b) \quad -2u + 3v = 3i + j - 2k$$

$$25. \quad u = \langle 2, 5, 0 \rangle, \quad v = \langle \frac{1}{2}, -1, 10 \rangle$$

$$\begin{aligned} u \cdot v &= 2\left(\frac{1}{2}\right) + 5(-1) + 0(10) \\ &= 1 - 5 + 0 \\ &= -4 \end{aligned}$$

$$27. \quad u = 6i - 4j - 2k, \quad v = \frac{5}{6}i + \frac{3}{2}j - k$$

$$\begin{aligned} u \cdot v &= 6\left(\frac{5}{6}\right) + (-4)\left(\frac{3}{2}\right) + (-2)(-1) \\ &= 5 - 6 + 2 \\ &= 1 \end{aligned}$$

$$29. \quad \langle 4, -2, -4 \rangle, \quad \langle 1, -2, 2 \rangle$$

$$\begin{aligned} u \cdot v &= 4 + 4 - 8 \\ &= 0 \end{aligned}$$

\therefore yes

$$37. \quad 3\hat{i} + 4\hat{j} + 5\hat{k}$$

$$|V| = \sqrt{3^2 + 4^2 + 5^2}$$

$$= \sqrt{50}$$

$$= 5\sqrt{2}$$

$$\cos \alpha = \frac{a_1}{|V|}$$

$$= \frac{3}{5\sqrt{2}}$$

$$= \frac{3\sqrt{2}}{10}$$

$$\cos \beta = \frac{a_2}{|V|}$$

$$= \frac{4}{5\sqrt{2}}$$

$$= \frac{2\sqrt{2}}{5}$$

$$\cos \gamma = \frac{a_3}{|V|}$$

$$= \frac{5}{5\sqrt{2}}$$

$$= \frac{\sqrt{2}}{2}$$

$$\alpha = \cos^{-1}\left(\frac{3}{10}\sqrt{2}\right)$$

$$= 64.9^\circ$$

$$\beta = 55.6^\circ$$

$$\gamma = 45^\circ$$

$$41. \quad \alpha = \frac{\pi}{3}, \quad \gamma = \frac{2}{3}\pi$$

$$\cos \beta = \pm \frac{1}{\sqrt{2}}$$

$$\cos^2 \alpha + \cos^2 \beta + \cos^2 \gamma = 1$$

$$\beta = \frac{\pi}{4}$$

$$\cos^2 \frac{\pi}{3} + \cos^2 \beta + \cos^2 \frac{2}{3}\pi = 1$$

$$\cos^2 \beta = 1 - \frac{1}{4} - \frac{1}{4}$$

$$= \frac{1}{2}$$

9.5

$$3. \quad u = \langle 1, 0, -3 \rangle, \quad v = \langle 2, 3, 0 \rangle$$

$$\begin{aligned} u \times v &= \begin{vmatrix} i & j & k \\ 1 & 0 & -3 \\ 2 & 3 & 0 \end{vmatrix} \\ &= (-1)^2 i \begin{vmatrix} 0 & -3 \\ 3 & 0 \end{vmatrix} + (-1)^3 j \begin{vmatrix} 1 & -3 \\ 2 & 0 \end{vmatrix} \\ &\quad + (-1)^4 k \begin{vmatrix} 1 & 0 \\ 2 & 3 \end{vmatrix} \\ &= 9i - 6j + 3k \end{aligned}$$

$$9. \quad u = \langle 1, 1, -1 \rangle, \quad v = \langle -1, 1, -1 \rangle$$

$$\begin{aligned} (a) \quad u \times v &= i \begin{vmatrix} 1 & -1 \\ 1 & -1 \end{vmatrix} - j \begin{vmatrix} 1 & -1 \\ -1 & -1 \end{vmatrix} \\ &\quad + k \begin{vmatrix} 1 & 1 \\ -1 & 1 \end{vmatrix} \\ &= 2j + 2k \end{aligned}$$

$$\begin{aligned} |u \times v| &= \sqrt{0^2 + 2^2 + 2^2} \\ &= 2\sqrt{2} \end{aligned}$$

$$(b) \quad \frac{u \times v}{|u \times v|} = \frac{1}{2\sqrt{2}} (2j + 2k)$$

$$17. \quad P(0, 1, 0), Q(1, 2, -1), R(-2, 1, 0)$$

$$\vec{PQ} = \langle 1-0, 2-1, -1-0 \rangle$$

$$= \langle 1, 1, -1 \rangle$$

$$\vec{PR} = \langle -2-0, 1-1, 0-0 \rangle$$

$$= \langle -2, 0, 0 \rangle$$

$$\vec{PQ} \times \vec{PR} = \begin{vmatrix} i & j & k \\ 1 & 1 & -1 \\ -2 & 0 & 0 \end{vmatrix}$$

$$= i \begin{vmatrix} 1 & -1 \\ 0 & 0 \end{vmatrix} - j \begin{vmatrix} 1 & -1 \\ -2 & 0 \end{vmatrix}$$

$$+ k \begin{vmatrix} 1 & 1 \\ -2 & 0 \end{vmatrix}$$

$$= 2j + 2k$$

$$\therefore v = \langle 0, 2, 2 \rangle$$

$$21. \quad u = \langle 3, 2, 1 \rangle, \quad v = \langle 1, 2, 3 \rangle$$

$$|u \times v|$$

$$= |u| |v| \sin \theta$$

$$= \sqrt{14} \sqrt{14} \sin 44.4^\circ$$

$$= 9.80$$

$$\cos \theta = \frac{u \cdot v}{|u| |v|}$$

$$= \frac{3+4+3}{\sqrt{14} \sqrt{14}}$$

$$= \frac{10}{14} = \frac{5}{7}$$

$$u \times v$$

$$= \begin{vmatrix} i & j & k \\ 3 & 2 & 1 \\ 1 & 2 & 3 \end{vmatrix} = i \begin{vmatrix} 2 & 1 \\ 2 & 3 \end{vmatrix} - j \begin{vmatrix} 3 & 1 \\ 1 & 3 \end{vmatrix} + k \begin{vmatrix} 3 & 2 \\ 1 & 2 \end{vmatrix}$$

$$+ k \begin{vmatrix} 3 & 2 \\ 1 & 2 \end{vmatrix}$$

$$= 4i - 8j + 4k$$

$$u \times v = \langle 4, -8, 4 \rangle$$

$$|u \times v| = \sqrt{4^2 + (-8)^2 + 4^2}$$

$$= \sqrt{96}$$

$$= 4\sqrt{6}$$

$$|u| = \sqrt{3^2 + 2^2 + 1^2}$$

$$= \sqrt{14}$$

$$|v| = \sqrt{1^2 + 2^2 + 3^2}$$

$$= \sqrt{14}$$

$$\theta = \cos^{-1} \frac{5}{7}$$

$$= 44.4^\circ$$

$$25. \quad P(1, 0, 1), \quad Q(0, 1, 0), \quad R(2, 3, 4)$$

$$\vec{PQ} = \langle 0-1, 1-0, 0-1 \rangle$$

$$= \langle -1, 1, -1 \rangle$$

$$\vec{PR} = \langle 2-1, 3-0, 4-1 \rangle$$

$$= \langle 1, 3, 3 \rangle$$

$$\Delta PQR = \frac{1}{2} b h$$

$$= \frac{1}{2} \sqrt{6^2 + 2^2 + (-4)^2}$$

$$= \frac{1}{2} \sqrt{56}$$

$$= \sqrt{14}$$

$$= \frac{1}{2} |\vec{PQ}| |\vec{PR}| \sin \theta$$

$$= \frac{1}{2} |\vec{PQ} \times \vec{PR}|$$

$$= \frac{1}{2} \left| \begin{vmatrix} i & j & k \\ -1 & 1 & -1 \\ 1 & 3 & 3 \end{vmatrix} \right|$$

$$= \frac{1}{2} \left| \left(i \begin{vmatrix} 1 & -1 \\ 3 & 3 \end{vmatrix} - j \begin{vmatrix} -1 & -1 \\ 1 & 3 \end{vmatrix} + k \begin{vmatrix} -1 & 1 \\ 1 & 3 \end{vmatrix} \right) \right|$$

$$= \frac{1}{2} |6i + 2j - 4k|$$

$$29. \quad u = \langle 1, 2, 3 \rangle, \quad v = \langle -3, 2, 1 \rangle, \\ w = \langle 0, 8, 10 \rangle$$

$$(a) \quad v \times w = i \begin{vmatrix} 2 & 1 \\ 8 & 10 \end{vmatrix} - j \begin{vmatrix} -3 & 1 \\ 0 & 10 \end{vmatrix} \\ + k \begin{vmatrix} -3 & 2 \\ 0 & 8 \end{vmatrix} \\ = 12i + 30j - 24k$$

$$u \cdot (v \times w) \\ = 12 + 60 - 72 \\ = 0$$

(b) \therefore vectors u and $v \times w$ are coplanar

9.6

3. $P(1, 0, -2)$, $V = \langle 3, 2, -3 \rangle$

$$r = r_0 + tV$$

$$r = \langle x, y, z \rangle$$

$$\begin{aligned}x &= x_0 + x_1 t \\ &= 1 + 3t\end{aligned}$$

$$= \langle 1+3t, 2t, -2-3t \rangle$$

$$\begin{aligned}y &= y_0 + y_1 t \\ &= 0 + 2t \\ &= 2t\end{aligned}$$

$$\begin{aligned}z &= z_0 + z_1 t \\ &= -2 - 3t\end{aligned}$$

$$9. P(1, -3, 2), Q(2, 1, -1)$$

$$\begin{aligned}\vec{PQ} &= \langle 2-1, 1-(-3), -1-2 \rangle \\ &= \langle 1, 4, -3 \rangle\end{aligned}$$

$$\begin{aligned}x &= x_0 + at \\ &= 1 + t\end{aligned}$$

$$\begin{aligned}y &= y_0 + bt \\ &= -3 + 4t\end{aligned}$$

$$\begin{aligned}z &= z_0 + ct \\ &= 2 - 3t\end{aligned}$$

$$15. \quad n = \langle 1, 1, -1 \rangle, \quad P(0, 2, -3)$$

$$(a) \quad P_0 = \langle 0, 2, -3 \rangle$$

$$r = P_0 + vt$$

$$v = \langle x-0, y-2, z+3 \rangle \\ = \langle x, y-2, z+3 \rangle$$

$$n \cdot v = 0$$

$$\langle 1, 1, -1 \rangle \cdot \langle x, y-2, z+3 \rangle = 0$$

$$x + y - 2 - z - 3 = 0$$

$$\therefore x + y - z - 5 = 0$$

$$(b) \quad x\text{-intercept: } x = 5$$

$$y\text{-intercept: } y = 5$$

$$z\text{-intercept: } z = -5$$



$$21. P(6, -2, 1), Q(5, -3, -1), R(7, 0, 0)$$

$$\begin{aligned}\vec{PQ} &= \langle 5-6, -3-(-2), -1-1 \rangle \\ &= \langle -1, -1, -2 \rangle\end{aligned}$$

$$\begin{aligned}\vec{PR} &= \langle 7-6, 0-(-2), 0-1 \rangle \\ &= \langle 1, 2, -1 \rangle\end{aligned}$$

$$\begin{aligned}\vec{PQ} \times \vec{PR} &= \begin{vmatrix} \hat{i} & \hat{j} & \hat{k} \\ -1 & -1 & -2 \\ 1 & 2 & -1 \end{vmatrix} \\ &= \hat{i} \begin{vmatrix} -1 & -2 \\ 2 & -1 \end{vmatrix} - \hat{j} \begin{vmatrix} -1 & -2 \\ 1 & -1 \end{vmatrix} \\ &\quad + \hat{k} \begin{vmatrix} -1 & -1 \\ 1 & 2 \end{vmatrix} \\ &= \hat{i}(5) - \hat{j}(3) + \hat{k}(-1) \\ &= 5\hat{i} - 3\hat{j} - \hat{k}\end{aligned}$$

$$n = \langle 5, -3, -1 \rangle, P(6, -2, 1)$$

$$r = P_0 + vt$$

$$r - P_0 = \langle x-6, y+2, z-1 \rangle$$

$$n \cdot r = 0$$

$$\langle 5, -3, -1 \rangle \cdot \langle x-6, y+2, z-1 \rangle = 0$$

$$5(x-6) + (-3)(y+2) + (-1)(z-1) = 0$$

$$5x - 30 - 3y - 6 - z + 1 = 0$$

$$\therefore 5x - 3y - z - 35 = 0$$

$$\vec{QR} = \langle 7-5, 3, 1 \rangle = \langle 2, 3, 1 \rangle$$

$$\vec{PQ} \times \vec{QR} = \begin{vmatrix} i & j & k \\ -1 & -1 & -2 \\ 2 & 3 & 1 \end{vmatrix}$$

$$= i(-1+6) - j(-1+4) + k(-3+2)$$

$$= 5i - 3j - k$$

$\therefore \vec{QR}$ interchangeable with \vec{PR} for cross product